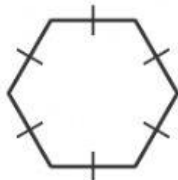


Check My Progress *(Lessons 1 through 3)*

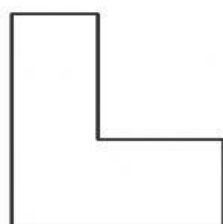
Name the polygon. Determine if it appears to be *regular* or *not regular*.

1.



1. _____

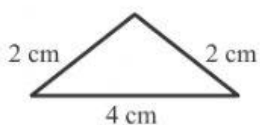
2.



2. _____

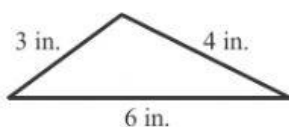
Determine the number of congruent sides. Then classify the triangle based on its sides.

3.



3. _____

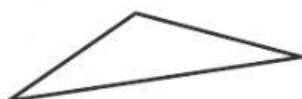
4.



4. _____

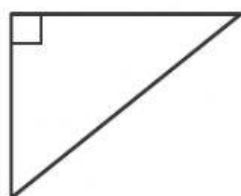
Classify the triangle based on its angles.

5.



5. _____

6.



6. _____