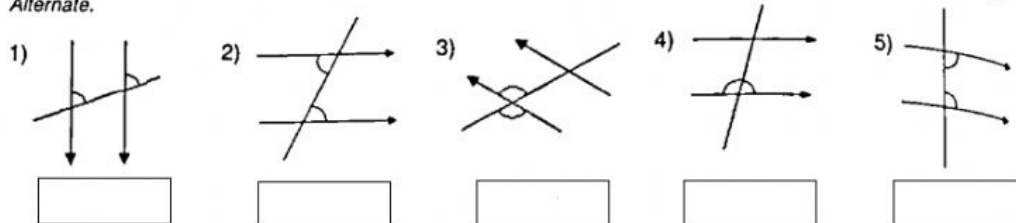
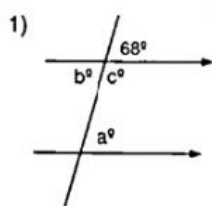


A. Identify each of the following angles by using the words, *Opposite*, *Adjacent*, *Corresponding*, *Co-interior* or *Alternate*.



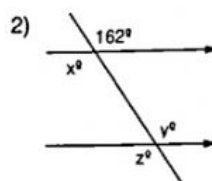
B. Find the size of each of the missing angles in the following diagram giving reasons for your answer.



a = \_\_\_\_\_ Reason: \_\_\_\_\_

b = \_\_\_\_\_ Reason: \_\_\_\_\_

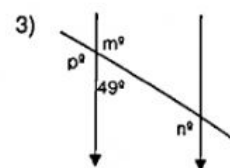
c = \_\_\_\_\_ Reason: \_\_\_\_\_



x = \_\_\_\_\_ Reason: \_\_\_\_\_

y = \_\_\_\_\_ Reason: \_\_\_\_\_

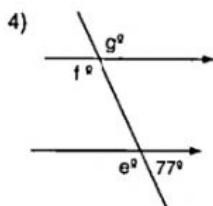
z = \_\_\_\_\_ Reason: \_\_\_\_\_



m = \_\_\_\_\_ Reason: \_\_\_\_\_

n = \_\_\_\_\_ Reason: \_\_\_\_\_

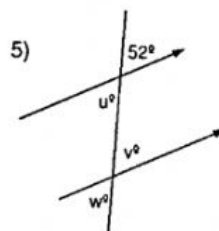
p = \_\_\_\_\_ Reason: \_\_\_\_\_



e = \_\_\_\_\_ Reason: \_\_\_\_\_

f = \_\_\_\_\_ Reason: \_\_\_\_\_

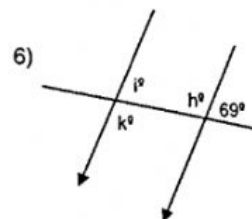
g = \_\_\_\_\_ Reason: \_\_\_\_\_



u = \_\_\_\_\_ Reason: \_\_\_\_\_

v = \_\_\_\_\_ Reason: \_\_\_\_\_

w = \_\_\_\_\_ Reason: \_\_\_\_\_



h = \_\_\_\_\_ Reason: \_\_\_\_\_

i = \_\_\_\_\_ Reason: \_\_\_\_\_

k = \_\_\_\_\_ Reason: \_\_\_\_\_