

Write down the correct answer in the box provided.

1. **All** living things _____.

- A. lay eggs
- B. live in water
- C. respond to changes
- D. have furs

2. We use our _____ **to listen**.

- A. ears
- B. skin
- C. tongue
- D. eyes

3. Look at the picture below.



What is it made up of?

- A. Metal
- B. Wood
- C. Glass
- D. Rubber

4. A _____ is an animal **with backbones**.

- A. Cockroach
- B. Beetle
- C. Worm
- D. Rabbit

5. Which sense organ tells us that a banana is yellow in colour?

- A. Eyes
- B. Tongue
- C. Ears
- D. Nose

☐

6. Plants can be classified into **trees, shrubs and** _____.

- A. ferns
- B. algae
- C. moss
- D. herbs





☐

7. Which of these objects will **sink** when placed in water?

- A. Ping pong ball
- B. Plastic bottle
- C. Hammer
- D. Boat

☐

8. Which of the objects below is made of **fabric**?

A		B		C		D	
----------	---	----------	---	----------	--	----------	---

☐

9. Read this clue and answer the question:

"I have moist skin. I can live on land and in water. I lay eggs in water. I have backbones. What am I?"

- A. Mammals
- B. Amphibians
- C. Birds
- D. Fish

☐

10. When **sand** is heated, it can be made into _____.

- A. Glass
- B. Wood
- C. Ceramic
- D. Fabric

☐

11. Which of these objects is the **most flexible**?

- A. a rock
- B. a wooden table.
- C. a window
- D. a plastic ruler

☐

12. **Classification** is _____.

- A. also known as organism.
- B. a form of energy.
- C. placing things into groups.
- D. Throwing rubbish anywhere you like.

☐

13. Which one of the groups below are **ALL** herbs?

A	B	C	D
Chilli	Rosemary	Mushroom	Algae
Coconut tree	Parsley	Palm tree	Rafflesia
Mimosa	Bay leaf	Moss	Bracken fern
Sunflower	Garlic	Bracken fern	Mango tree


☐

14. From **which living thing** do **papers** come from?

- A. sheep
- B. trees
- C. flower
- D. elephant

☐

15. Which of the following activities **produce sound**?



- A. A and D only
- B. A, B, and C only
- C. A and C only
- D. All of the above

☐

TOTAL MARKS = 15

END OF PAPER