




Name -			
Phase 1- Foundation Numeracy Class Worksheet -15			
Stage-	Beginner	Grade-	1
Conceptual Area -	Operations on Number System	Topic-	Subtraction


A. Subtract the numbers in the box and fill in the blanks. Refer the images below the corresponding box for guidance.

a. $6 - 4 = 2$

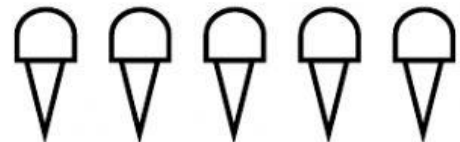
b. $9 - 8 = \underline{\quad}$



c. $12 - 10 =$



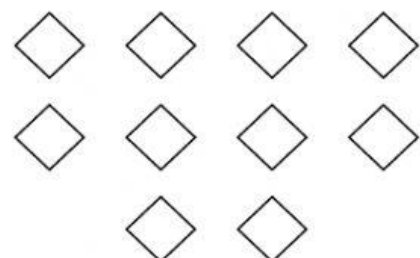
d. $5 - 5 = \underline{\quad}$



e. $7 - 5 = \underline{\quad}$




f. $10 - 4 = \underline{\quad}$




B. Subtract the numbers and fill the box . Refer the images below the corresponding question for guidance.


a. $7 - 3 =$




b. $6 - 4 =$




c. $5 - 5 =$



d. $8 - 3 =$



e. $10 - 2 =$



f. $9 - 4 =$

