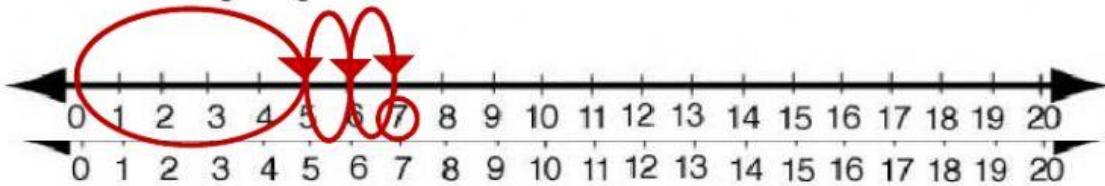




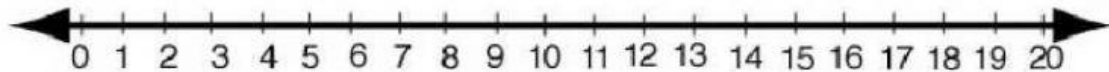
Name -			
Phase 1- Foundation Numeracy Class Worksheet -11			
Stage-	Beginner	Grade-	1
Conceptual Area -	Operations on Number System	Topic-	Addition

A. Add the following using the number line

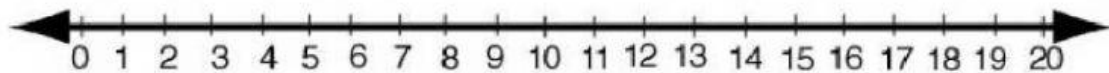


a.  $5 + 2 =$

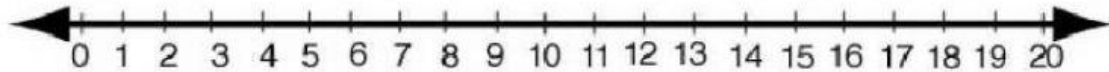
b.  $9 + 1$



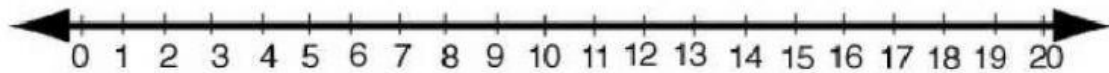
c.  $4 + 1 =$



d.  $6 + 2 =$




e.  $3 + 1 =$



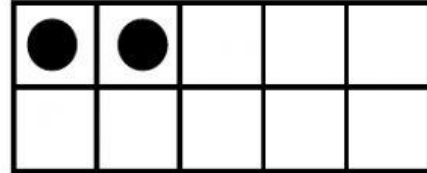
f.  $7 + 2 =$

B. Let's make 10

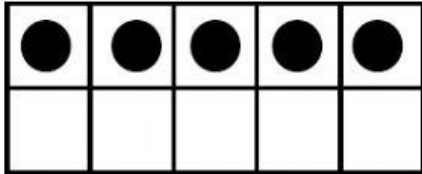
a.  $7 + \underline{3} = 10$



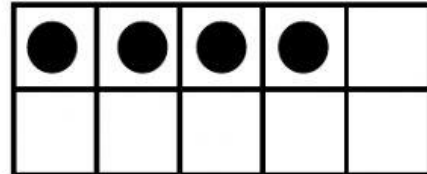
b.  $2 + \underline{\quad} = 10$



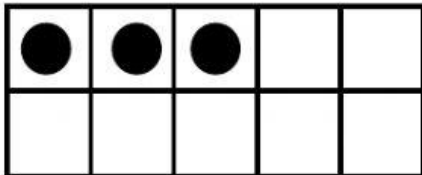
c.  $5 + \underline{\quad} = 10$



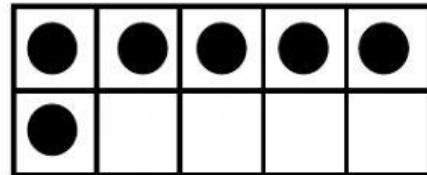
d.  $4 + \underline{\quad} = 10$



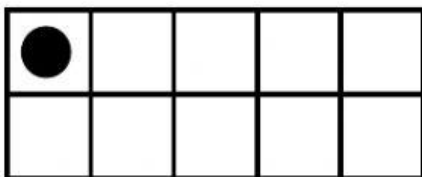
e.  $3 + \underline{\quad} = 10$



f.  $6 + \underline{\quad} = 10$



g.  $1 + \underline{\quad} = 10$



h.  $9 + \underline{\quad} = 10$

