




Name -			
Phase 1- Foundation Numeracy Class Worksheet -10			
Stage-	Beginner	Grade-	1
Conceptual Area -	Operations on Number System	Topic-	Addition


A. Find out 1 more and 2 more




a. You have **5**



b. You have ____




c. You have ____



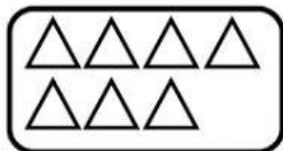
d. You have ____



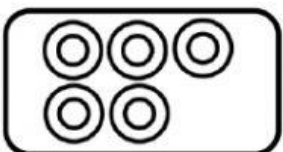
1 more is **6**



1 more is ____




1 more is ____



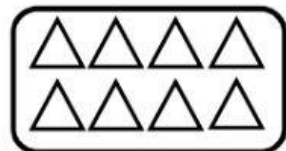
1 more is ____



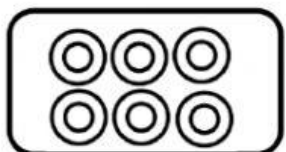
2 more is **7**



2 more is ____

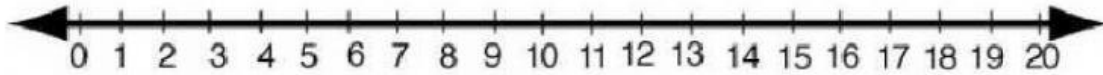


2 more is ____




2 more is ____

B. Fill in the boxes using the number line



- a. **TWO** more than 7 =
- b. **ONE** more than 9 =
- c. **TWO** more than 2 =
- d. **ONE** more than 8 =
- e. **TWO more** than 3 =

C. Solve -



- a. $3 + 3 = 6$
- b. $7 + 1 =$
- c. $4 + 1 =$
- d. $6 + 4 =$
- e. $5 + 2 =$
- f. $8 + 1 =$
- g. $2 + 2 =$