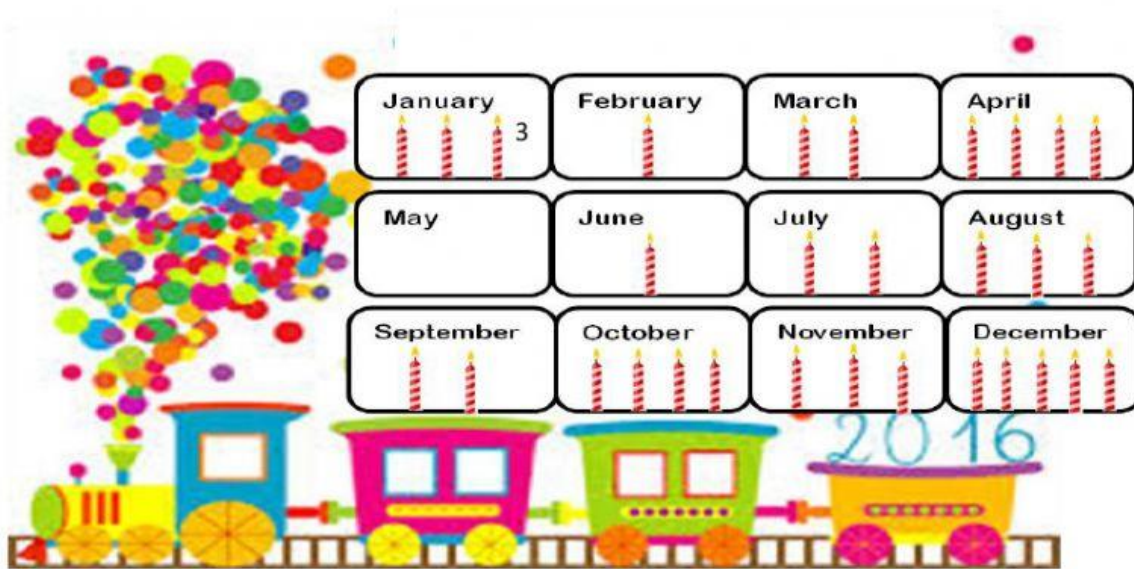




| | | | |
|---|---------------|--------|---|
| Name - | | | |
| Phase 1- Foundation Numeracy Class Worksheet -26 | | | |
| Stage- | Progressing | Grade- | 2 |
| Conceptual Area - | Data Handling | Topic- | Collecting, representing, and interpreting simple data from surrounding |

A. Count the candles and write the number of birthdays in each month



- Which month has most birthdays?

- Which month has least birthdays?

- How many students celebrate their birthday in the month of October?









- Which month has no birthdays?

- How many birthdays are in December?

- How many birthdays are in April?

g. How many birthdays are in September?

B. Favourite snacks of children are here. Count and answer the questions.

| | | | |
|--|---------------|--|--------------------------------|
|  | DOSA |  | <input type="text" value="4"/> |
|  | LADDOO |  | <input type="text"/> |
|  | SAMOSA |  | <input type="text"/> |
|  | JALEBI |  | <input type="text"/> |

- How many children like laddoo? _____
- How many children like jalebi? _____
- How many children like dosa? _____
- Which snack is liked by 7 children? _____
- Which snack is liked 2 students? _____
- Which snack is liked by most popular? _____
- Out of samosa and laddoo, which is more popular? _____