

Unit - 2

Counting in Groups

1)




How many
groups?

7

How many in
each group?

2

2)



3)



4)



Name _____

Class / Section _____

7

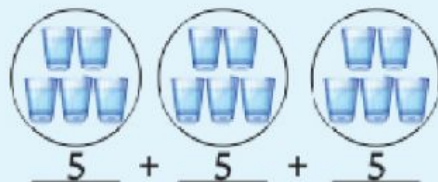
Roll No. _____

Date _____

Counting in Groups

Count, add and write

a)



3

Group

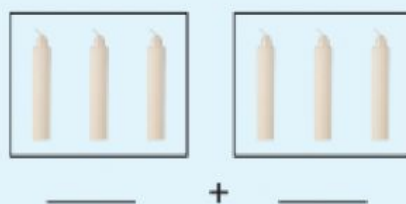
5

In each group

15

Total glasses

b)

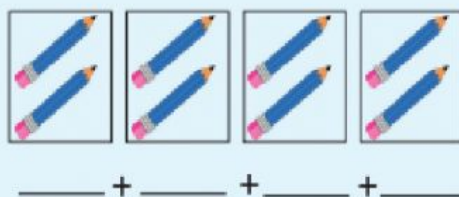


Group

In each group

Total Candles

c)

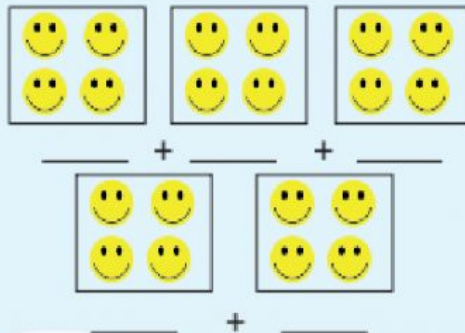


Group

In each group

Total pencils

d)



Group

In each group

Total smileys

Name _____

Class / Section _____

8

Roll No. _____

Date _____

Let's count

1)



How many pair of shoes?

Total number of shoes

2)



How many Jars?

Total fish in both the jars

3)



How many group
of stars?

Total number of stars.

4)



How many bunches
of Bananas?

Total number of Bananas

Name _____

Class / Section _____

9

Roll No. _____

Date _____

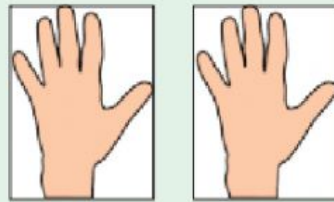
5)



How many flowers?

Total number of petals

6)



How many hands?

Total number of fingers


7)



How many necklaces?

Total number of pearls

8)



How many group of candles?

Total number of candles

Name _____

Class / Section _____

10

Roll No. _____

Date _____

Count in groups



How many groups?

4

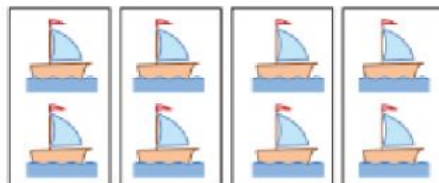
How many stars in each group

3




How many groups?

How many ice-creams in each group



How many groups?

How many yacht in each group



How many groups?

How many trees in each group