

Name: _____

EASTER TERM TEST.

MATHEMATICS

1. Write the numeral or word names for

a. 18-_____

b. _____ -forty-seven

c. 84-_____

d. 100-_____

2. Put these numbers from smallest to biggest

a. 10 8 6 7 5 4

Put these numbers from biggest to smallest.

a. 14 22 5 34 16

3. Select ALL the odd numbers in the list below.

12 29 41 53 34 67

4. State whether each number sentence below is TRUE or FALSE.

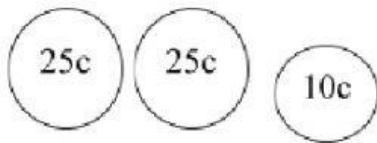
a. $20 + 10 = 50$ _____

b. $7 - 3$ is more than $7 + 3$ _____

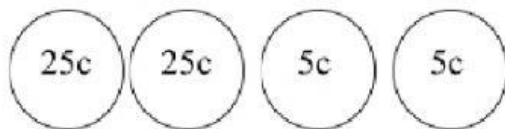
5. Complete the statement below.

38 = ____ tens and ____ ones

6. This is Ethan's money.



This is Jorel's money



Tick ✓ the box next to the correct statement.

_____ Ethan has more money than Jorel.


_____ Ethan has less money than Jorel.

_____ Ethan and Jorel have the same amount of money.

7. The pictograph below shows the number of pumpkin each child picked during a pumpkin picking contest.



Each  = 2 pumpkins

Each  = 1 pumpkin

a. Who picked the most amount of pumpkins?

b. Who picked the least amount of pumpkins?

c. Which two children picked the same amount of pumpkins?

_____ and _____

d. How many pumpkins were picked altogether?

Ans _____

e. How many more pumpkins does Mary have than Erin? _____