



Mathematics

Number 16- Money


Look at the cost of each item. Solve the word problems and type the number statements.



cookie



hotdog



fries



cupcake

1. Saydee wants to buy a **cupcake** and **hotdog**.
What is the total cost of the cupcake and hotdog?

2. Tryce wants to buy **fries**. He has **\$4**.
How much more money he needs to buy the fries?
Tryce needs \$_____ more to buy the fries.

3. Asimah has **\$16**. She buys a **cookie**.
How much money is **left**?
