

Name: _____

Year 2 Bijak

Wednesday

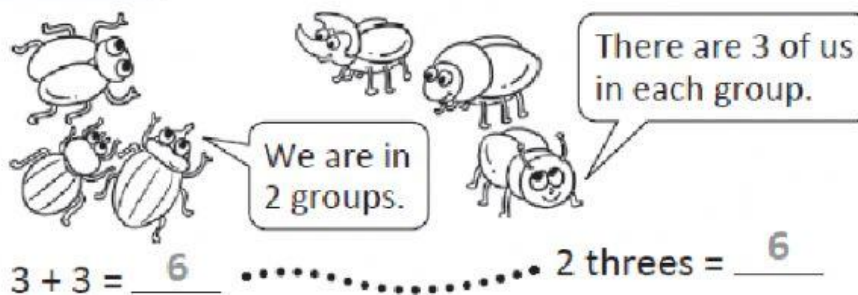
16th March 2022

Chapter 4 - Multiplication and Division

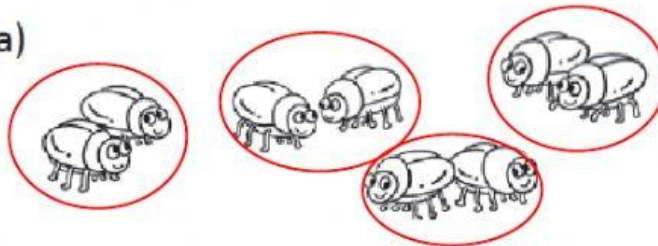
Topic: Multiplication-Adding the same number

1. First, count the groups of insects.
Then, count the insects in each group.
Fill in the blanks.

Example

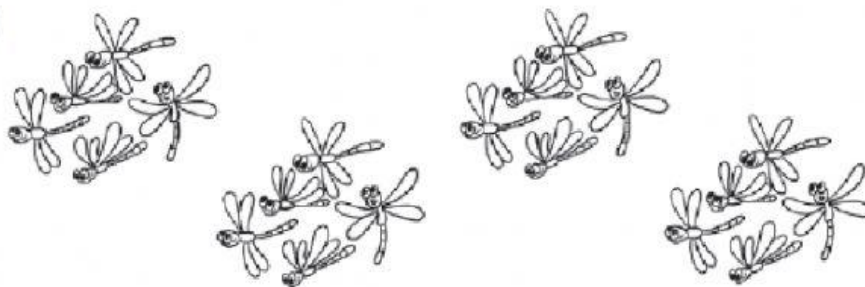


(a)




$2 + 2 + 2 + 2 = \underline{\hspace{2cm}}$ $4 \text{ twos} = \underline{\hspace{2cm}}$


(b)



$5 + 5 + 5 + 5 = \underline{\hspace{2cm}}$ $4 \text{ fives} = \underline{\hspace{2cm}}$




$4 + 4 + 4 = \underline{\hspace{2cm}}$ 3 fours = $\underline{\hspace{2cm}}$



$8 + 8 = \underline{\hspace{2cm}}$ 2 eights = $\underline{\hspace{2cm}}$

2. Look at the pictures.
Then, fill in the blanks.




$\underline{\hspace{1cm}} + \underline{\hspace{1cm}} + \underline{\hspace{1cm}} + \underline{\hspace{1cm}} + \underline{\hspace{1cm}} + \underline{\hspace{1cm}} = \underline{\hspace{2cm}}$

$\underline{\hspace{2cm}}$ twos = $\underline{\hspace{2cm}}$


There are $\underline{\hspace{2cm}}$ snails altogether.

3. Look at the pictures.
Then, fill in the blanks.

Example




There are 10 fish.



2 fives = 10

(a)



There are _____ dolphins. 4 _____ = _____

4. Look at the legs in the pictures.
Then, fill in the blanks.

(a) Each child has _____ legs.



$2 + 2 + 2 + 2 =$ _____

4 twos = _____

4 children have _____ legs.

5. Look at these pictures.
Then, fill in the blanks.

- (a) A starfish has _____ arms.
6 **fives** = _____
6 starfish have _____ arms.

