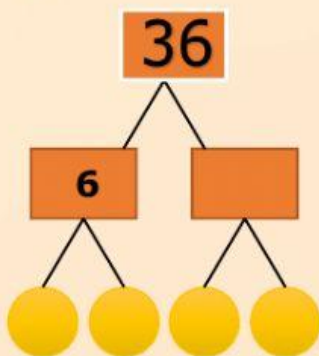


Nama: \_\_\_\_\_

Ungkapkan nombor berikut dalam bentuk pemfaktoran perdana

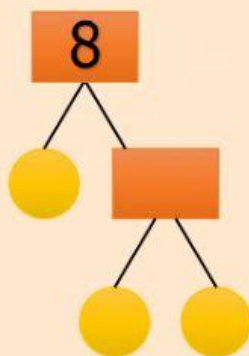
## PEMFAKTORAN PERDANA

1.



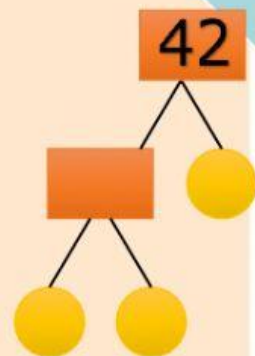
$$36 = 2 \times 3 \times \_\_\_\_ \times \_\_\_\_$$

2.



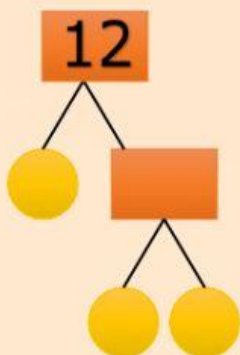
$$8 = \_\_\_\_ \times \_\_\_\_ \times \_\_\_\_$$

3.



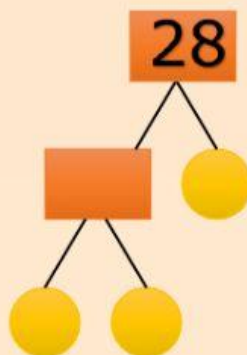
$$42 = \_\_\_\_ \times \_\_\_\_ \times \_\_\_\_$$

4.



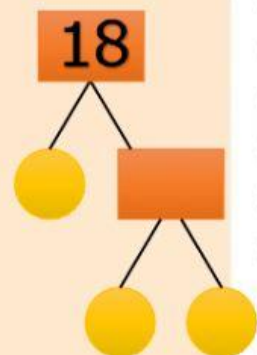
$$12 = \_\_\_\_ \times \_\_\_\_ \times \_\_\_\_$$

5.



$$28 = \_\_\_\_ \times \_\_\_\_ \times \_\_\_\_$$

6.



$$18 = \_\_\_\_ \times \_\_\_\_ \times \_\_\_\_$$