

































**THIRD REINFORCEMENT EXAM
KINDER 2**

I. MATH

A. Comparing Numbers

Compare the numbers by choosing the correct sign.

<div></div> <p>1. 24 <input data-bbox="438 719 555 797" type="text"/> 18</p>	<div></div> <p>2. 5 <input data-bbox="1038 719 1155 797" type="text"/> 7</p>
<div></div> <p>3. 6 <input data-bbox="438 958 555 1037" type="text"/> 10</p>	<div></div> <p>4. 3 <input data-bbox="1038 958 1155 1037" type="text"/> 3</p>
<div></div> <p>5. 13 <input data-bbox="438 1189 555 1267" type="text"/> 8</p>	<div></div> <p>6. 14 <input data-bbox="1038 1189 1155 1267" type="text"/> 14</p>
<div></div> <p>7. 5 <input data-bbox="438 1424 555 1503" type="text"/> 40</p>	<div></div> <p>8. 12 <input data-bbox="1038 1424 1155 1503" type="text"/> 13</p>
<div></div> <p>9. 20 <input data-bbox="438 1659 555 1738" type="text"/> 10</p>	<div></div> <p>10. 24 <input data-bbox="1038 1659 1155 1738" type="text"/> 24</p>

**B. NUMBER BEFORE, BETWEEN, AFTER**

Type the correct number in the box.

What number comes before?	What number comes in between?	What number comes after?
<input type="text"/> 11	21 <input type="text"/> 23	1 <input type="text"/>
<input type="text"/> 22	8 <input type="text"/> 10	15 <input type="text"/>
<input type="text"/> 17	14 <input type="text"/> 16	19 <input type="text"/>
<input type="text"/> 5	28 <input type="text"/> 30	27 <input type="text"/>
<input type="text"/> 7	2 <input type="text"/> 4	31 <input type="text"/>



C. ODD AND EVEN NUMBERS

Is the number odd, or even? Click on the correct answer.

1. 24	<div>ODD</div> <div>EVEN</div>	2. 8	<div>ODD</div> <div>EVEN</div>
3. 6	<div>ODD</div> <div>EVEN</div>	4. 3	<div>ODD</div> <div>EVEN</div>
5. 13	<div>ODD</div> <div>EVEN</div>	6. 14	<div>ODD</div> <div>EVEN</div>
7. 5	<div>ODD</div> <div>EVEN</div>	8. 12	<div>ODD</div> <div>EVEN</div>
9. 20	<div>ODD</div> <div>EVEN</div>	10. 27	<div>ODD</div> <div>EVEN</div>

Prepared by: T. Ampolitod