


Name: _____

Simple Word Problem: Subtraction without Regrouping

Steps to Success:

1. Read question carefully
2. Highlight key points
3. Draw bar model
4. Label
5. Add or subtract?

There are 287 pupils in school.
There are 143 girls in school.
How many boys are there in the school?



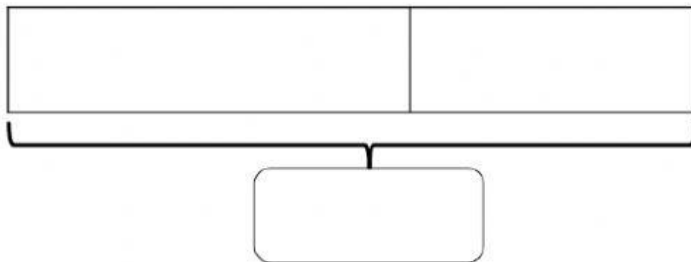
There are 144 boys in the school.

1. Complete the following diagrams, workings and sentences.

660 people were watching a football match.

There were 320 children watching.

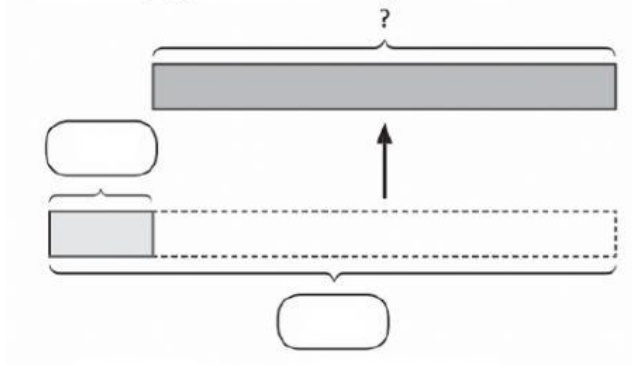
How many adults were there watching?



Th	H	T	O
-			

There were _____ adults watching the football match.

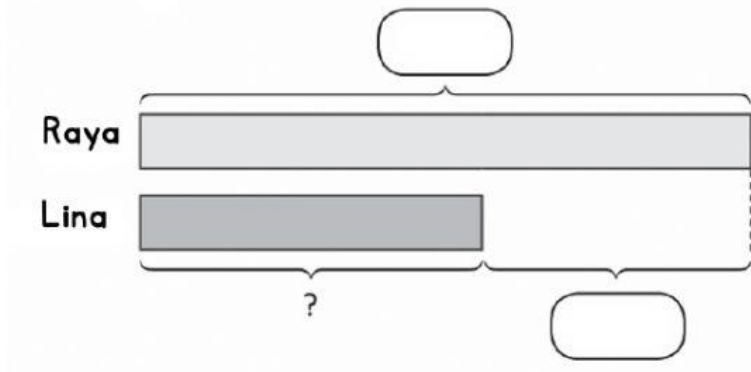
Mr Rahim had 2856 game cards in his shop.
He sold some, and had 832 game cards left.
How many game cards got sold?



	Th	H	T	O
-				

There were _____ books in the library altogether.

Raya baked 3675 cookies.
Raya baked 575 more than Lina baked.
How many cookies did Lina baked?



	Th	H	T	O
-				

Lina baked _____ cookies.