





















Sunday	  
Monday	     
Wednesday	   
Friday	 
Saturday	    

  = 10 minutes of bike riding

- 1.) How many minutes on Friday? \_\_\_\_\_ minutes.
- 2.) How many minutes on Saturday? \_\_\_\_\_ minutes.
- 3.) How many minutes on Wednesday? \_\_\_\_\_ minutes.
- 4.) How many minutes on Monday? \_\_\_\_\_ minutes.
- 5.) What day had the most minutes? \_\_\_\_\_
- 6.) What day had the least minutes? \_\_\_\_\_