
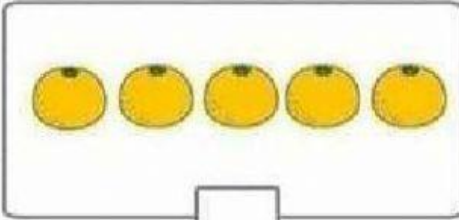


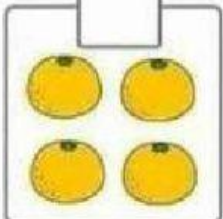
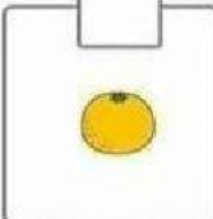

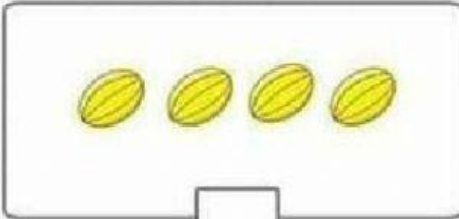


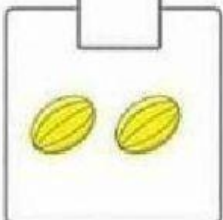
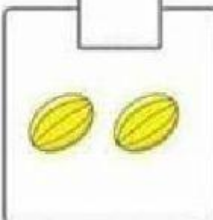




Họ và tên: .....

Bài 1: Em hãy điền số vào ô trống (theo mẫu)

 5	 <input type="text"/>		
 3	 2	 <input type="text"/>	 <input type="text"/>
 <input type="text"/>	 <input type="text"/>		
 <input type="text"/>	 <input type="text"/>	 <input type="text"/>	 <input type="text"/>

Bài 2: Em hãy điền số thích hợp vào ô trống.

The image shows six house-shaped grids arranged in two rows of three. Each house has a red roof with a white circle containing a number. The body of the house is yellow and divided into a grid of boxes. The numbers on the roofs are 4, 3, 2, 5, 6, and 7. The grids contain numbers 1, 2, 3, 4, 5, 6, and 7 in the first column, with empty boxes in the second column.

4	
1	
2	
3	
4	

3	
1	
2	
3	










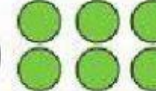







2	
1	
2	

5	
1	
2	
3	
4	
5	

6	
1	
2	
3	
4	
5	
6	

7	
1	
2	
3	
4	
5	
6	
7	

Bài 3: Em hãy điền dấu  $>$ ,  $<$ ,  $=$  vào ô trống (theo mẫu)

 4	<input data-bbox="667 304 831 398" type="text" value="&gt;"/>	3 
 4	<input data-bbox="667 416 831 510" type="text"/>	5 
 2	<input data-bbox="667 528 831 622" type="text"/>	2 
 5	<input data-bbox="667 618 831 712" type="text"/>	8 
 9	<input data-bbox="667 730 831 824" type="text"/>	6 
 1	<input data-bbox="667 842 831 936" type="text"/>	3 
 6	<input data-bbox="667 954 831 1048" type="text"/>	6 
 7	<input data-bbox="667 1066 831 1160" type="text"/>	5 
 4	<input data-bbox="667 1178 831 1272" type="text"/>	2 