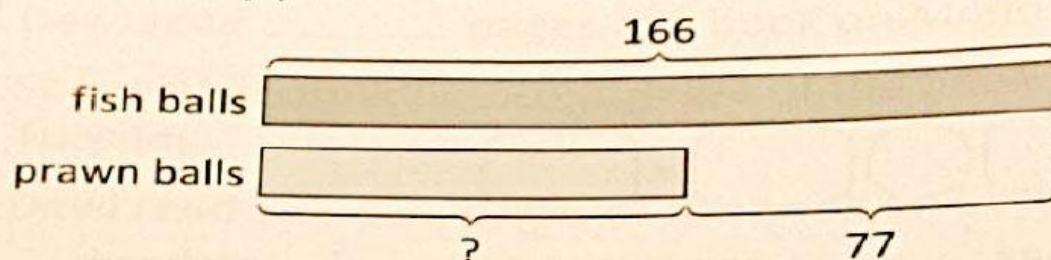


Practice 6 Subtraction: Comparing Two Sets to Subtract

Solve. Use models to help you.

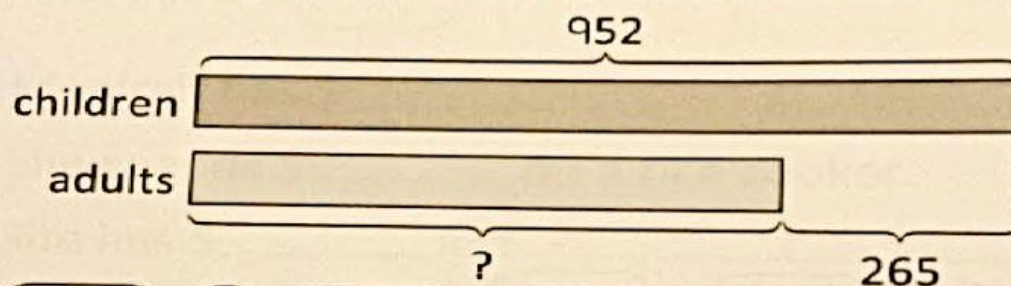
- Rosita fried 166 fish balls for a party.
She fried 77 fewer prawn balls than fish balls for the party.
How many prawn balls did Rosita fry?



$$166 - 77 = \boxed{}$$

Rosita fried _____ prawn balls.

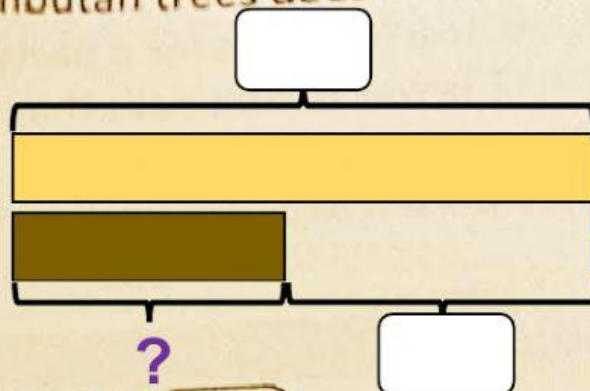
- 952 children watched a musical.
265 fewer adults than children watched the musical.
How many adults watched the musical?



$$\boxed{} - \boxed{} = \boxed{}$$

_____ adults watched the musical.

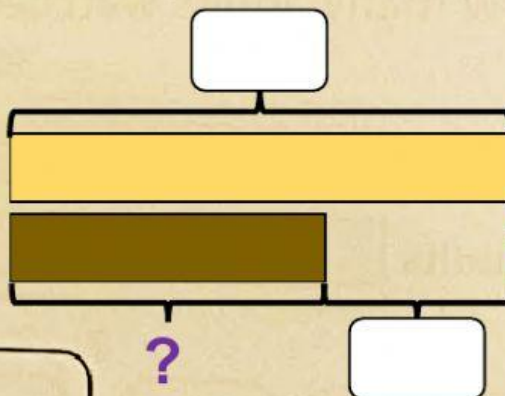
3. Ali has 347 durian trees in his orchard.
He has 162 more durian trees than rambutan trees in his orchard.
How many rambutan trees does Ali have in his orchard?



$$\square \bigcirc \square = \square$$

Ali has _____ rambutan trees in his orchard.

4. At a barbecue party, Samli ordered 219 sticks of chicken satay.
He ordered 120 more sticks of chicken satay than mutton satay.
How many sticks of mutton satay did Samli order?



$$\square \bigcirc \square = \square$$

Samli ordered _____ sticks of mutton satay.