




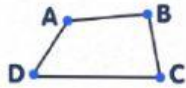


WORKSHEET 11.3.2022
UNIT 6: DAY BY DAY

I. Look and choose

point line segment zigzag quadrilateral cylinder sphere

II. Choose the best answer

1. Which of the following is “greater than” sign?

- A. = B. > C. <

2. Which of the following is “less than” sign?

- A. = B. > C. <

3. 300 is..... 1000

- A. greater than B. equal to C. less than

4. One thousand is.....one hundred.

- A. greater than B. equal to C. less than

5. Seven hundred and twenty is720.

- A. greater than B. equal to C. less than

6. Write: $200 > 100$

- A. Two hundred is less than one hundred.
B. Two hundred is greater than one hundred.
C. Two hundred is equal to one hundred.

7. He tired because he is sick.

A. look

B. looking

C. looks

8. Are you happy? – No, not. I'm sad.

A. I is

B. I'm

C. I

9. What sport do you like doing?

A. I likes playing soccer.

B. I like play soccer.

C. I like playing soccer.

10. How is he?

A. He's frowning.

B. He frowning.

C. He's frown.

II. Read and answer the questions.

I am Marco. I am ten years old, and I love sports.

My favorite sport is basketball. I play it three times a week with my friends at school. At weekend, I and my brother play basketball in the park name " Big Ben" near my house. I really want to play it with my father but he looks tired. He doesn't like playing basketball with me.



1. Marco's favorite sport is

2. Marco plays basketball at

3. He practices basketball with his brother in

4. Marco is years old

5. Marco's father looks

6. Marco plays basketball a week with his

7. Marco loves