

Science Test

Parts of a Flower

Instructions: Answer the following questions.
Write your answers in the boxes provided.

1. The male part of the flower is called the stamen.

True False

2. The female part of the flower is called the pistil.

True False

3. The sepal protects the flower when it is a bud.

True False

4. Which part of the flower helps to attract insects?

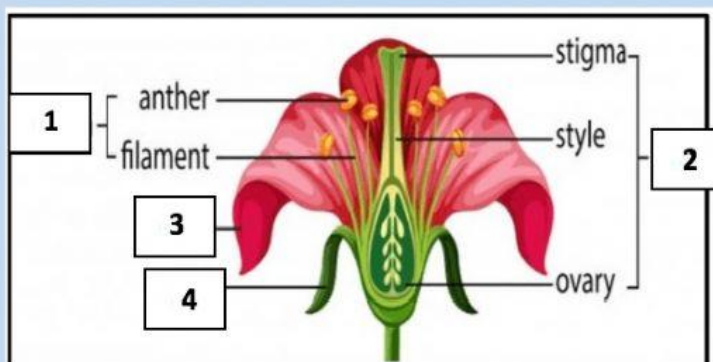
(pistil, sepals, petals)

5. Which part of the flower makes the pollen?

(filament, anther, pedicel)

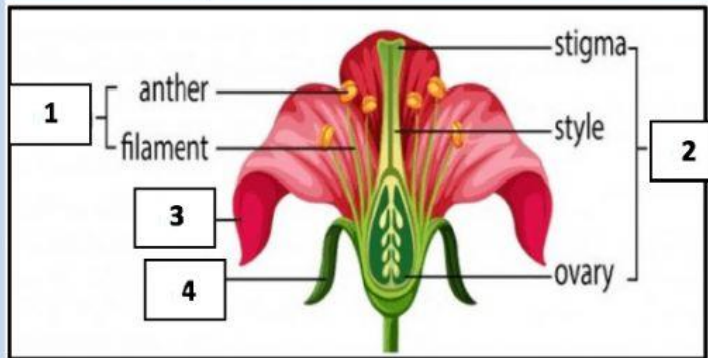
6. The transfer of pollen grains from the anther to the stigma is called _____. **(Production, Pollination)**

7. Name the part of the flower labelled **Number 1**



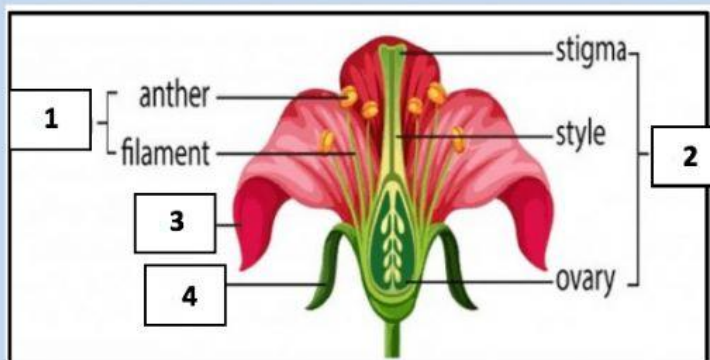
Answer:

8. Name the part of the flower labelled **Number 2**



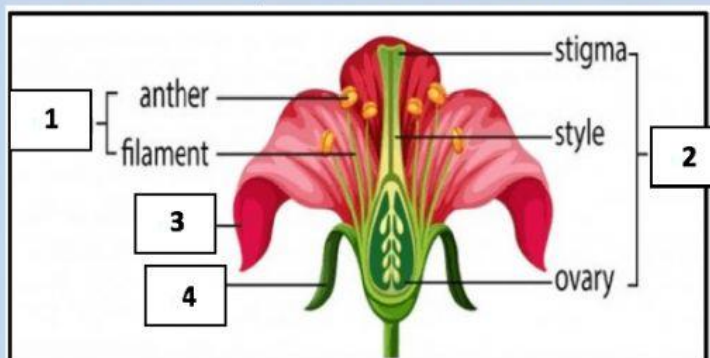
Answer:

9. Name the part of the flower labelled **Number 3**



Answer:

10. Name the part of the flower labelled **Number 4**



Answer: