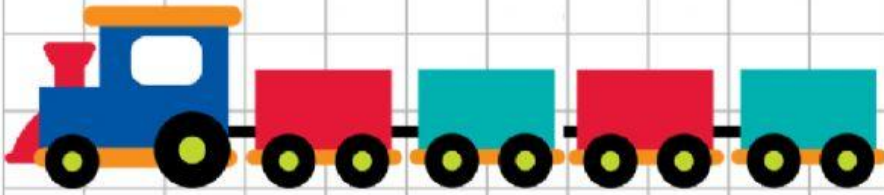


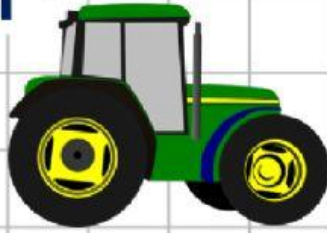
1 a) Nói độ dài của mỗi đồ chơi



cm




cm




cm

1 a) Nêu độ dài của mỗi đồ chơi



cm



cm



cm

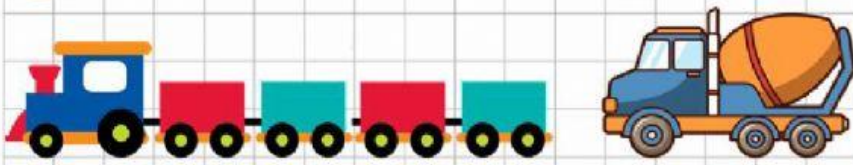
1 b) Đồ chơi nào dài nhất?

A grid containing seven toy vehicles with their lengths in centimeters indicated in boxes below them:

- A blue and red train with five cars: 11 cm
- A blue and orange cement mixer truck: 5 cm
- A green tractor: 4 cm
- A yellow school bus: 7 cm
- A yellow crane truck: 5 cm
- A red car: 4 cm



1 c) Có bao nhiêu xe ngắn hơn xe khách?



11 cm

5 cm



4 cm



7 cm



5 cm



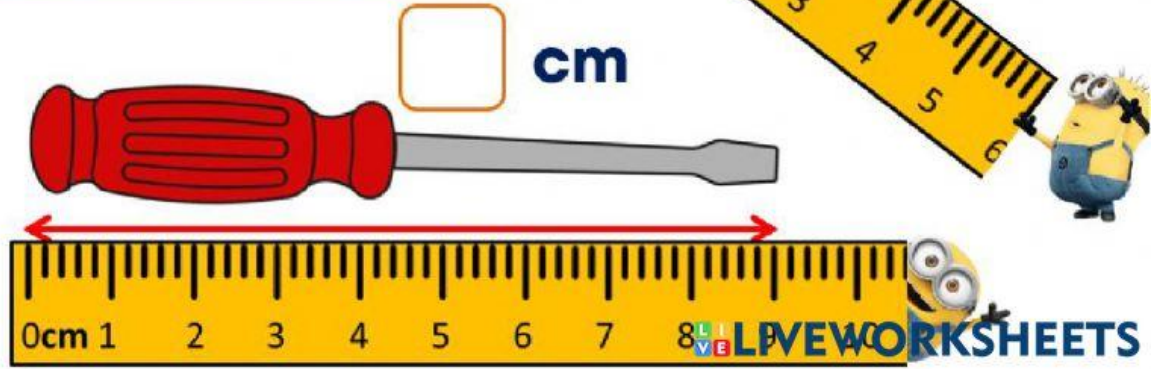
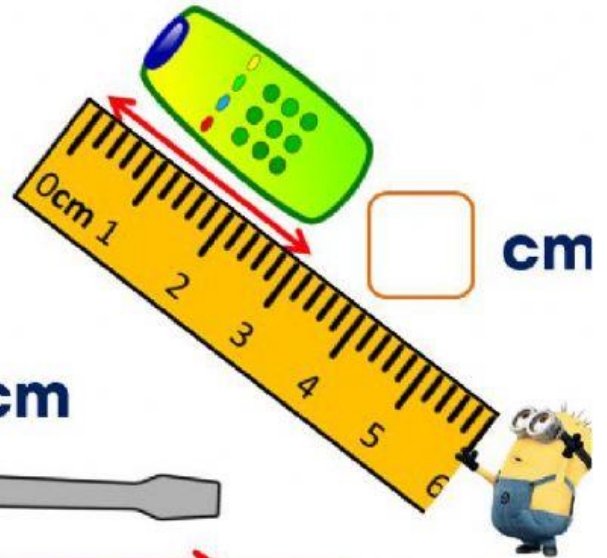
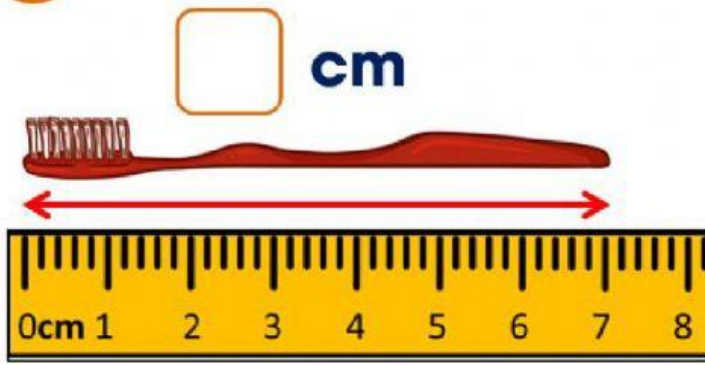
4 cm

Có..... xe ngắn hơn xe khách.



LIVEWORKSHEETS

2 Đo độ dài các đồ vật. Đồ vật nào dài nhất?



3 Bút chì nào dài hơn 8 cm?

