



Cambridge Primary Programme

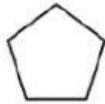
Name: \_\_\_\_\_

Date: \_\_\_\_\_



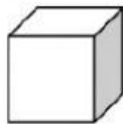
Class: \_\_\_\_\_

Part 1. Choose the object that match the first shape.

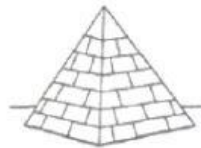
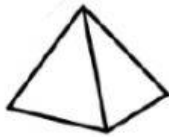
1.



2.



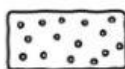
3.




4.



5.



6.



**Part 2. Choose the correct answer.**

**1. Which holds the most?**



A.




B.



C.

**2. What's next?**



A.



B.



C.

**3. Which has the biggest capacity?**



A.




B.



C.


**4. Which has the smallest capacity?**



A.



B.



C.


5. Which holds the least?



A.



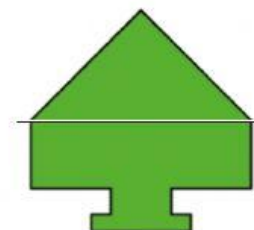
B.



C.

Part 3. Look and write Yes or No.

Is it symmetrical?



\_\_\_\_\_

\_\_\_\_\_

\_\_\_\_\_

\_\_\_\_\_

Part 4: Read and write 1, 2, 3, 4 under each picture.

1. Order the objects from the smallest capacity to the biggest capacity.




2. Order the objects from the biggest capacity to the smallest capacity.




**Part 5. Order the numbers.**



**a. From the biggest to the smallest**





63	27	95	32
----	----	----	----


--	--	--	--

46	59	74	93
----	----	----	----


--	--	--	--




**b. From the smallest to the biggest**




82	23	91	47
----	----	----	----


--	--	--	--






75	17	38	29
----	----	----	----

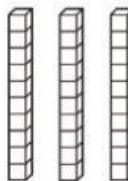

--	--	--	--

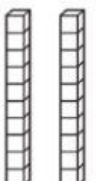


**Part 6. What are these numbers?**

	
tens	ones

13

	
tens	ones

	
tens	ones