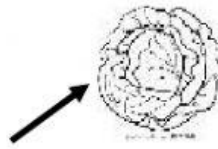


Which part of the following plants do we eat.

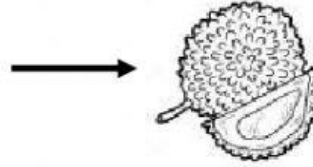
1. We eat the _____ of cabbage.




2. We eat the _____ of radish.



3. We eat the _____ of durian.



4. We eat the _____ and _____ of morning glory.



5. We eat the _____ of grapes.



6. We eat the _____ of sunflower.



7. We eat the _____ butterflypea.




8. We eat the _____ and _____ of bokchoy.



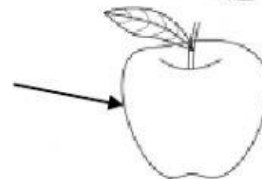
9. We eat the _____ of pear .



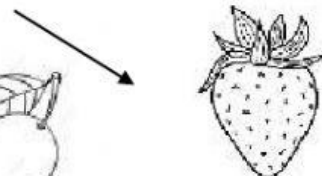
10. We eat the _____ of cherry .



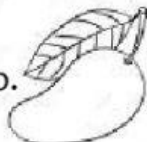
11. We eat the _____ of apple .



12. We eat the _____ a strawberry.



13. We eat the _____ of mango.



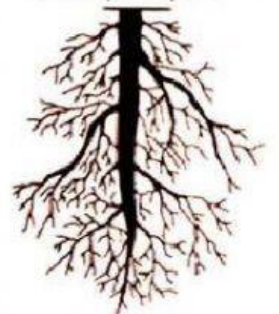
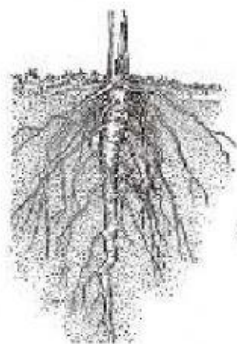
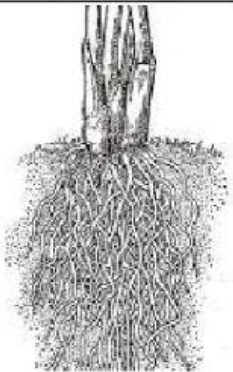

14. We eat the _____ and _____ of watermelon .



15. We eat the _____ of tomato .



Identify the following roots: Taproot or Fibrous root



Identify the following parts of the plant and its uses

Makes food

Hold seeds

Will grow into a new plant


The reproductive part

Keeps the plant upright and takes up water and minerals from the soil

Lift the branches and leaves up. It carries water and food to different parts

Name: _____

Function: _____



Name : _____

Function : _____

Name : _____

Function : _____

Name : _____

Function : _____

Name : _____

Function : _____

Name : _____

Function : _____

Circle the correct answer:

1. Which one of the following objects is made of glass?

- a. Eyeglasses b. Watch c. Motorcycle

2. Which one of the following objects is made of wood ?

- a. Box b. Socks c. Pants

3. Which of these objects is made of cloth ?

- a. Towel b. Floor c. Bottle water

4. Which of these objects is made of Rubber?

- a. Rubber duck b. Rubber boat c. a and b

5. Which of these objects is made of metal?

- a. Fork b. Knife c. a and b

6. What material can float on the water and it comes from the tree?

- a. Wood b. Glass c. Rubber

7. What material is made of fabrics ?

- a. Cloth b. Metal c. Rubber

8. Which of the following materials can be stretched and elastic?

- a. Ball b. Balloon c. a and b

9. Which of these objects that can float on the water and light material ?

- a. Plastic b. Cloth c. Wood

10. Which of these objects is transparent and break easily?

- a. Glass door b. Window c. a and b

11. Where does the sound comes from ?

- a. Vibrating objects b. Pencil c. phone

12. Living things and some natural phenomena are called

- a. Natural sources b. Artificial sources c. Both

13. Our _____ vibrates when we talk and sing .

28. Which of the following is an example of land plant ?

a. Water lily

b. Mango tree

c. Both a and b

29. Which of the following is an example of water plant ?

a. Hibiscus plant

b. Palm tree

c. Lotos plant

30. How many parts of plant do we have ?

a. 6

b. 2

c. 1

Write true if the statement is correct and Write False if the statement is incorrect.

_____ 1. A Window is made from rubber.

_____ 2. A box is made from cloth.

_____ 3. Floor tiles are made from shale.

_____ 4. A marble can use to make a table.

_____ 5. Comb is made from plastic.

_____ 6. Sounds come from vibrating objects.

_____ 7. We can hear sounds with our feet .

_____ 8. The Flower is the reproductive of the plant

_____ 9. The fruit holds the seeds.

_____ 10. Wood can absorb water and can be folded.

_____ 11. Shale are used to make a roof tiles.

_____ 12. A rubber band is made from rubber

_____ 13. Shale is used to make a soil suitable for growing crops .

_____ 14. Bee and cat are examples of natural sound.

_____ 15. Printer and Television are examples of Man-made sound.

Identify the colors of rocks

Granite

Limestone

Shale

Marble

Slate

Gemstones

