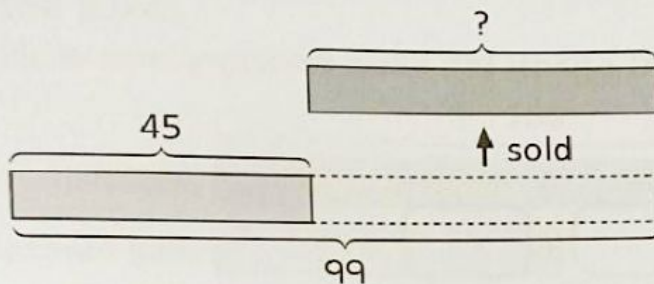


MATHS YEAR 2

Practice 5 Subtraction: Taking Away One Set

Solve. Use models to help you.

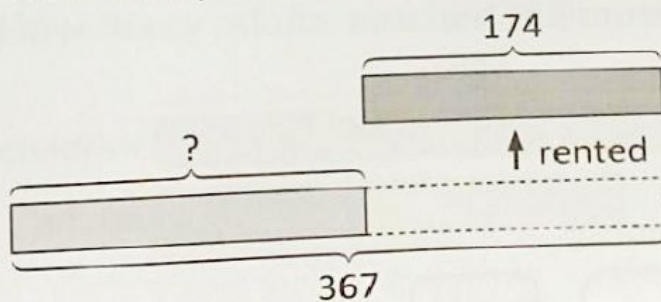
1. Hassan had 99 skate scooters.
He sold some of them and had 45 skate scooters left.
How many skate scooters did Hassan sell?



$$99 - 45 = \boxed{}$$

Hassan sold _____ skate scooters.

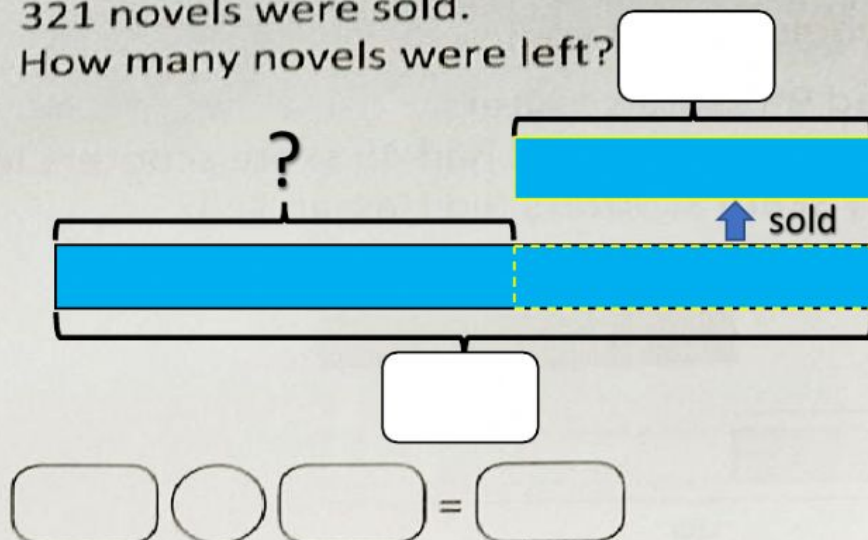
2. There were 367 bicycles at a bicycle shop.
174 bicycles were rented out.
How many bicycles were left?



$$\boxed{} - \boxed{} = \boxed{}$$

_____ bicycles were left.

3. There were 789 novels at a bookshop.
321 novels were sold.
How many novels were left?



4. There were 627 tadpoles in a pond.
488 tadpoles grew into frogs.
How many tadpoles were left in the pond?

