


Glass T

Glass R



1.) Glass T's volume is _____ than Glass R's volume.

2.) _____'s volume is more than Glass T's volume.



green jar



red jar



blue jar

3.) The blue jar's volume is _____ the green jars.

4.) The _____ volume is more than the green jars.

5.) The blue jar's volume is _____ the red jars.

7 l 500 ml



Mixed fruit juice

5 l 800 ml



Orange juice

7 l 320 ml



Pineapple juice

6.) Order the juices from least to greatest:

_____ , _____ , _____



green jar







red jar



blue jar

7.) Order the jars from greatest to least:

			
Capacity of a teaspoon	Volume of tea in a cup	Capacity of a bucket	Capacity of a water tank
5 mL	200 mL	15 L	500 L

8.) The containers are ordered from _____ to _____.