

## May 15 Quiz

1. Match the following Quadrilaterals with their names



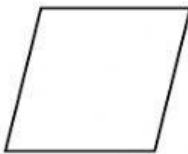
Square




Rhombus



Rectangle



Trapezoid



Parallelogram

2. Choose the drop down to fill in the blanks

a. A square has \_\_\_\_\_ and \_\_\_\_\_.

- b. A rectangle has \_\_\_\_\_.
- c. A rhombus has \_\_\_\_\_.
- d. A parallelogram has \_\_\_\_\_.
- e. A trapezoid has \_\_\_\_\_.
- f. Rectangle, Square, Rhombus are all special  
\_\_\_\_\_.

### 3. Choose the best option

- a. A rectangle can't be a square because it doesn't have  

4 right angles4 equal sides
- b. A rhombus can't be a square because it doesn't have


4 right angles

4 equal sides

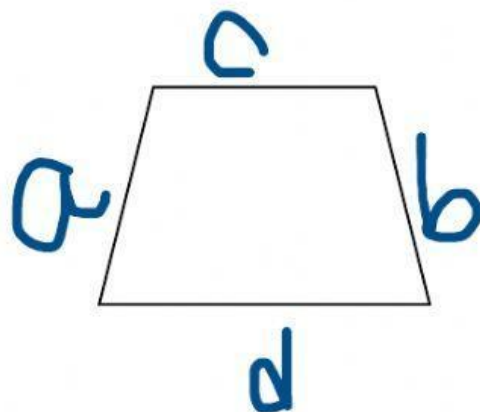
c. A square is a rectangle because it has \_\_\_\_\_  
and rectangle also has \_\_\_\_\_

d. A square is a rhombus because it has \_\_\_\_\_  
and rhombus also has \_\_\_\_\_

4. Identify the parallel lines in the given shapes



a & c                      a & b                      a & d



a & b

a & c

c & d

5. Why a rhombus can't be a square?

---

6. Why a square is also a rhombus?

---