

Volume of cuboids

What is the volume of each 3D shape?

a)



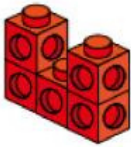
volume = cubes

b)



volume = cubes

c)



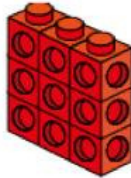
volume = cubes

d)




volume = cubes

e)



volume = cubes

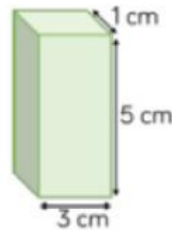
f)



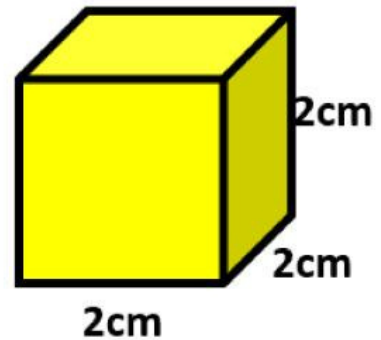
volume = cubes



The length is:
The width is: .
The height is:



The length is:
The width is: .
The height is:



Volume = cm^3



The volume of this shape is 7 cubes.

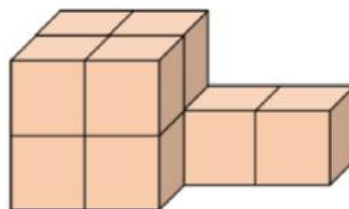
Do you agree with Teddy? _____

Explain your answer.



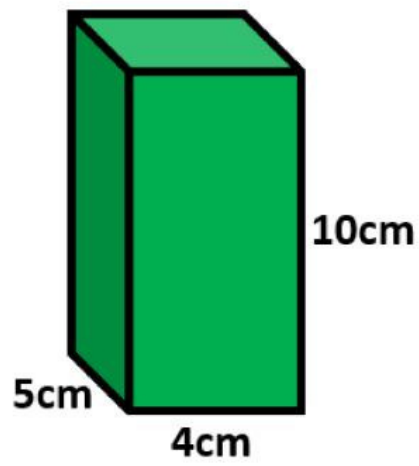
Amir says he will need 8 cm^3 to build this shape.

Dora says she will need 10 cm^3 .

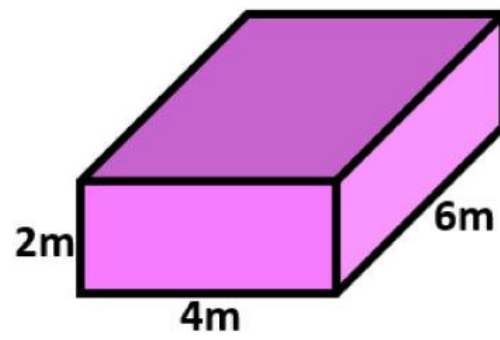


Who do you agree with?

Explain why.

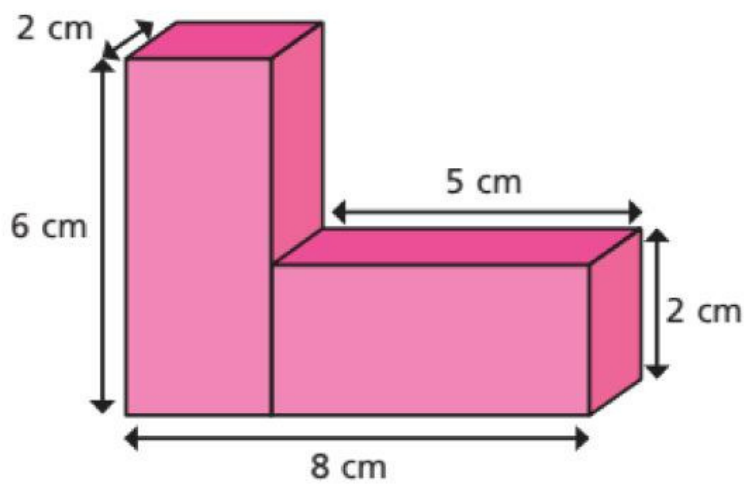


Volume = cm^3



Volume = m^3

Extra 4 Experts



Volume = cm^3