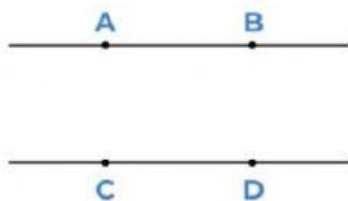


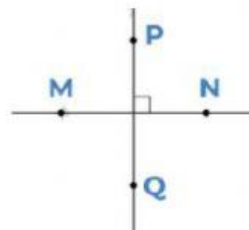
REVISION MIDTERM TEST – SEMESTER II

MATH – GRADE 4

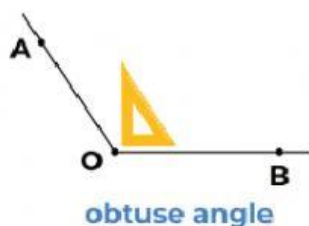
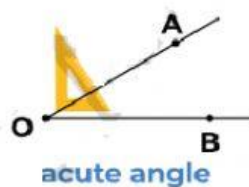
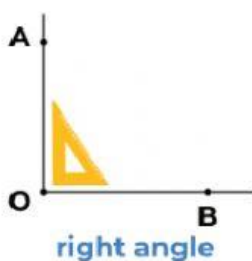
**Tư vựng*



Line AB is **parallel** to line CD.



Line MN is **perpendicular** to line PQ.



**Cấu trúc:*

20 is **divisible by** 2 and 5 (20 chia hết cho 2 và 5)


31 is **not divisible by** 3 (31 không chia hết cho 3)

Even numbers: Số chẵn;

Odd numbers: số lẻ

SECTION 1: Fill in the blanks with the correct word

1. Line AD isto line AB
2. Line CD isto line AD and line CB
3. Line CB isto line DA
4. Line AB is parallel to line
5. Line is parallel to line AD
6. Line DC is perpendicular to line and line



SECTION 2 – Fill in the blanks

- Twolines never meet.
- Two.....lines meet at a right angle.
- An angle is smaller than a right angle
- An.....angle is bigger than a right angle, but smaller than a straight angle.
- Aangle is two times as big as a right angle
- A angle is half of a straight angle


SECTION 3. Choose the correct answer.

- What angle is this?




- A. Right B. Acute C. Obtuse D. Straight

- What angle is this?



- A. Right B. Acute C. Obtuse D. Straight

- What angle is this?



- A. Right B. Acute C. Obtuse D. Straight

- What angle is this?



- A. Right B. Acute C. Obtuse D. Straight

- Which is smallest angle?

- A. Right B. Acute C. Obtuse D. Straight

- Which is biggest (largest) angle?

- A. Right B. Acute C. Obtuse D. Straight

7. Which angles are smaller than an obtuse angle?

- A. Straight B. Acute and right C. Acute and straight

8. Which angles are bigger than a right angle?

- A. Straight and acute B. Obtuse and acute C. Obtuse and straight

SECTION 4 – Fill in the blanks with “divisible” or “not divisible”

1) 621 is by 2

2) 680 is by 5

3) 108 isby 3

4) 246 isby 9

5) 375 isby 3 butby 9

6) 120 isby 5 andby 2