





Social 3 Review

Put a mark **X** on the letter before the correct answer.

Obtained _____ marks
Full score of 8 marks

1. Chiang Mai is a city in the _____ of Thailand.
 - a. South
 - b. North
 - c. West
2. Hat Yai is a city in the _____ of Thailand.
 - a. North
 - b. East
 - c. South
3. Which symbol shows a school on a map?
 - a. 
 - b. 
 - c. 
4. If you want to go swimming in the sea every day. What is the best city to live in?
 - a. Udon Thani
 - b. Chiang Rai
 - c. Phuket
5. If you are in Bangkok and travel north. What city will you come to first?
 - a. Udon Thani
 - b. Pattaya
 - c. Lopburi

What are the four main directions? Write them.



It is the drawing of an area showing different places.

map diagram photograph

It is a flat representation of the Earth.

map diagram photograph

It is a map taken in the air. map diagram photograph

The is about the climate.

weather

sun

climate

The climate in rainy season is

cold

hot and dry

hot and wet

The climate in mountain is

cold

hot and dry

hot and wet

The climate in the desert is

cold

hot and dry

hot and wet

Match the natural resources in the box.

TV

forest

burger

sea

water

computer

laptop

tree

soil

house

Name the landscapes



DIFFERENT LANDSCAPES


Look at the pictures below and answer the questions.

1. What type of landscape is this?

☐ Sea

☐ Mountains

☐ River



2. What kind of work do you think people do in this community?

☐ Swimming

☐ Fishing

☐ Taxi Driver

3. What is the best way to travel in this community?

- ☐ By car ☐ By truck ☐ By boat

4. What type of landscape is this?

- ☐ River ☐ Mountains ☐ Sea



5. What kind of work do you think people do in this community?

- ☐ Walking ☐ Running ☐ Animal farming

6. What is the fastest way to travel in this mountains?

- ☐ car ☐ walk ☐ helicopter

7. What type of landscape is this?

- ☐ River ☐ Sea ☐ Plains



8. What kind of work do you think people do in this community?

- ☐ Fishing ☐ Farming ☐ Office

9. What is the best way to travel in this community?

- ☐ By car ☐ By pick-up truck ☐ By bike

Choose the before the correct answer.

1. Why do people who live in the plains do farming?

- a. The land is flat. b. The land is steep. c. The land is under the water.

2. How is the climate in the high mountains?

- a. warm and wet b. cold and windy c. hot and windy

3. What kind of work do people on the sea do?

- a. Fishing b. Farming c. Painting

4. Where is the best place to grow rice?

- a. steep mountains b. dry flat areas c. wet flat areas

5. The biggest and highest mountains in Thailand are in the

- a. north b. south c. west

1. What is the difference between the past and present?



o Using machines to harvest the rice.

o Using people and more people to harvest the rice


Draw a line and match up the pictures from the past to the present.

Past		Present

Below are words of natural events that can change the landscape and communities.

Find the word and write it under the correct picture.

olofd	↔
sutnima	↔
locvnao	↔
..	↔



Choose the correct answer.

1. What is a thing that is man-made and holds a lot of water?
a. Tsunami b. Dam c. Floods
2. Why is rice farming different from the past to present?
a. use of machinery b. use of more people c. use of more rice
3. How can we help the environment in the community?
a. Plant a tree. b. Cut a tree down. c. Have no plants or park.
4. A very big wave is called
a. Toonami b. Tsunami c. Tisnamy
5. If there are more people in the community what do we need?
a. More rubbish and dirty water b. Less trees and forest
c. More houses and food

Name some natural disaster happened around the world.

.....

What are the different types of pollution?

a.....

b.....

c.....

d.....

Give example of natural resources.

.....

List some example of climate in Thailand

.....

Choose the correct answer.

a.It is an area where a lot of people live together.

community

rural

urban

b. It is bad for our health and bad to our environment.

disaster

pollution

farming

c. These are resources made from nature.

Natural resources

Man-made resources

Community resources

d. It is very important for tourism, fishing and trading. (soil air water)

Is the good for the environment or bad for the environment?

Solar Power



Burning oil



Wind Power



Burning Coal



Hydro electric power



Write 'urban' or 'rural' under each picture.

