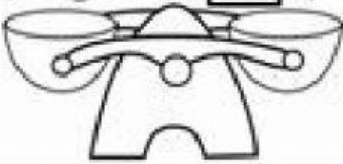
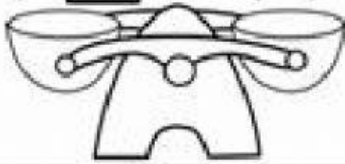

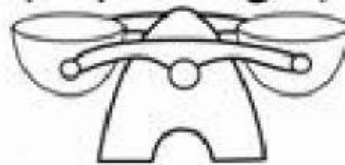





Balance it.

Vyvážte váhu, aby bolo na oboch stranách rovnako.

$4 + 6 = \square + 8$ 	$5 + \square = 4 + 4$ 
$\square + 3 = 4 + 1$ 	$0 + 7 = 6 + \square$ 
$9 + 1 = 4 + \square$ 	$8 + \square = 0 + 9$ 
$2 + 3 = \square + 2$ 	$\square + 7 = 8 + 2$ 