

Name: _____ Student's No.: _____ Level/Class: P2/1

I. Multiple Choice. Choose the letter of your answer. (20 points)

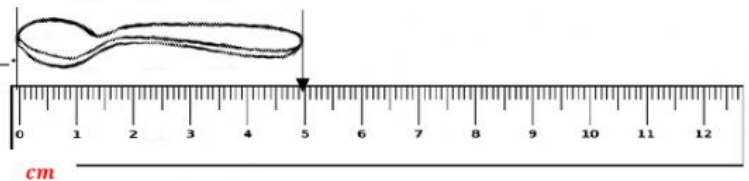
1) How many *millimetres* in 1 *centimetre*? $1\text{ cm} = \underline{\quad? \quad}\text{ mm}$

- a. 10 b. 100 c. 1,000

2) How many *centimetres* in 50 *millimetres*? $50\text{ mm} = \underline{\quad? \quad}\text{ cm}$

- a. 5 b. 50 c. 500

3) The length of the spoon is _____




- a. 5 *centimetres* b. 5 *metres* c. 5 *millimetres*

4) The length of the brush is _____ *cm*



- a. 6 *centimetres* b. 7 *centimetres* c. 8 *centimetres*

5) The length of the rope is _____ *cm* _____ *mm*.



- a. 7 *cm* 5 *mm* b. 7 *cm* 50 *mm* c. 9 *cm* 5 *mm*

6) Which of the lengths is the **shortest**?

a. 4 cm

b. 80 cm

c. 90 cm

7) Which of the lengths is the **longest**?

a. 200 cm

b. 45 cm

c. 80 m

8) Which of the heights is the **tallest**?

a. 9 cm 5 mm

b. 600 cm

c. 9 m

9) Arrange the objects **from the shortest to the longest**?



a. tack, bat, comb

b. bat, comb, tack

c. tack, comb, bat

10) Arrange the lengths **from the tallest to the shortest**?



a. Chris, Jen, Jordan

b. Jen, Jordan, Chris

c. Jordan, Jen, Chris

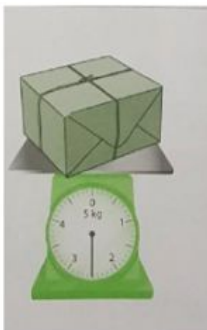
11) How many **kheeds** in 1 kilogram? 1 kg = ____ kheeds

a. 1 kheed

b. 10 kheeds

c. 100 kheeds

12) What is the weight of the parcel in ____kg____kheeds?



a. 2 kg 3 kheeds

b. 2 kg 5 kheeds

c. 3 kg 5 kheeds

13) What is the weight of the lobster in ____*kg*____*kheeds*?

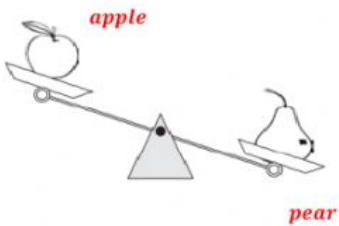


a. 4 kg 2 *kheeds*

b. 4 kg 20 *kheeds*

c. 40 *kheeds*

14) The weight of the pear is _____ than the weight of an apple.



a. *harder*

b. *heavier*

c. *lighter*

15) The weight of an eggplant is _____ than the weight of the pumpkin.




a. *harder*

b. *heavier*

c. *lighter*

Items 16 – 18)



16) The **length of the pencil** is _____ than the **length of the hammer**.

a. *heavier*

b. *longer*

c. *shorter*

17) The **length of the spoon** is _____ than the **length of the key**.

a. *heavier*

b. *longer*

c. *shorter*



18) The **length of the hammer** is _____ than the **length of the spoon**.

a. *heavier*

b. *longer*

c. *shorter*

Items 19 – 20)



19) The **weight of the pomelo** is _____ than the **weight of the duck**.

a. *heavier*

b. *lighter*

c. *taller*

20) The **weight of the duck** is _____ than the **weight of the mango**.

a. *heavier*

b. *lighter*

c. *taller*