

February 2022 Monthly Test

Mathematics

Study the calendar to answer questions 1-3.

2022 MARCH						
SUNDAY	MONDAY	TUESDAY	WEDNESDAY	THURSDAY	FRIDAY	SATURDAY
		1	2	3	4	5
6	7	8	9	10	11	12
13	14	15	16	17	18	19
20	21	22	23	24	25	26
27	28	29	30	31		

1. What year is shown on the calendar?
2. How many days are there in the month shown above?
3. Which month comes after the month shown?
4. Look at the activities shown in the pictures. Choose the activity that takes a short time.



Washing hands



Sleeping overnight

5. Choose the correct spelling for the word name **20**.

twnety

tewnty

twenty

6. Put in before and after numbers below.













(a) _____ **14**

(b) **18** _____

7. Add the sum to complete the statement.

$$\begin{array}{r} 9 \\ + 4 \\ \hline \\ \hline \end{array}$$

Study the information shown in the box below.

Favorite Musical Instrument	
	  
	 
	   



= 1 student

8. How many students like the guitar?

9. Which instrument was like by the **most** students?