






A crockery set of a restaurant's kitchen has the following no. of items:

Crockery		Number
	Plate	54
	Cup	42
	Teapot	15
	Spoon	99
	Bowl	63

(a) Which utensil is the most in number?

Ans.

(b) Which utensil is the least in number?

Ans.

(c) How many utensils are there in total?

Ans.

(d) How many cups and teapots are there in total?

Ans.

(e) How many spoons and bowls are there in total?

Ans.