

## Mathematics


### Weekly Test

Complete the subtractions.

$$\begin{array}{r} 1. \quad 6 \\ - 2 \\ \hline \\ \hline \end{array}$$

$$2. 13 - 5 = \underline{\quad}$$

3. Make sets of 3 objects.



There are            sets of 3 apples in a set of 15 apples.            sets of 3 equals 15.

4. Two bicycle has            wheels.











2 sets of 2 =

5. Complete the table.

The tally chart shows the data taken from children of Egypt Village Primary School.

**Favourite Fruit**

Banana 		
Pineapple 		
Pear 		
Grapes 		

Answer the questions.

6. What is the **title** of the chart? \_\_\_\_\_

7. Which fruit is liked the **least**? \_\_\_\_\_

8. **Altogether** how many children like pineapple and grapes? \_\_\_\_\_

9. How **many more** children like grapes than pear? \_\_\_\_\_

10. How many **fruits** are shown in the chart?  
\_\_\_\_\_

11. Four (4) more children like banana than pineapple. True / False