




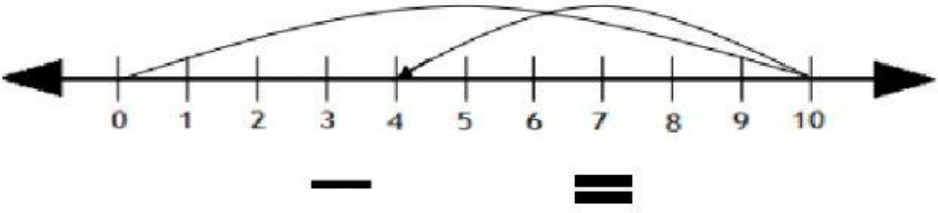


Mathematics Weekly Test

Name

No.	Questions	Marks
1.	<p>How many ice- creams are there?</p>  <p>Answer</p>	1
2.	<p>Write in words:</p> <p>13</p> <p>12</p> <p>11</p> <p>18</p>	4
3.	<p>Select the shapes that are the same.</p> 	1
4.	<p>Write the number in the two coins that will equal 10 ¢ .</p> 	1

5.	Order objects from shortest to longest using 123.	
		1
6.	Order the trees from tallest to shortest using 1 2 3 4 5 6.	
		1
7.	Write the number sentence using the number line.	
		1
8.	Complete the statements. a) $10 + \quad = 17$	

	b) $+ 11 = 15$ c) 6 add 5 equals d) 14 plus 5 is	4
9.	Carl has eight mangoes. David has five mangoes. How many mangoes do they have in all? Number Sentence + =	1
10.	15 dolls 17 pies 12 sweets - 5 dolls - 11 pies - 7 sweets	3
11.	12 is how much more than 9? 17 is how much more than 11?	2
	TOTAL	20