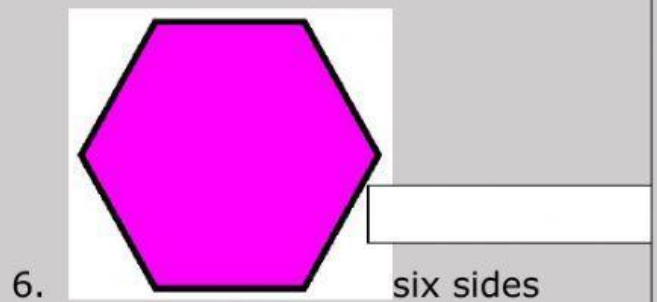
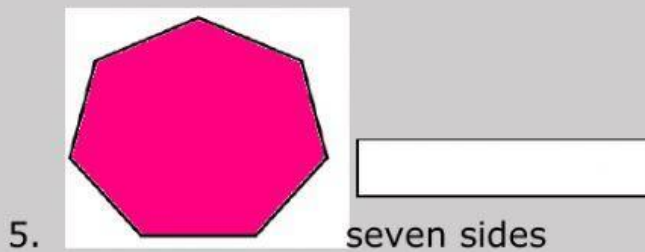
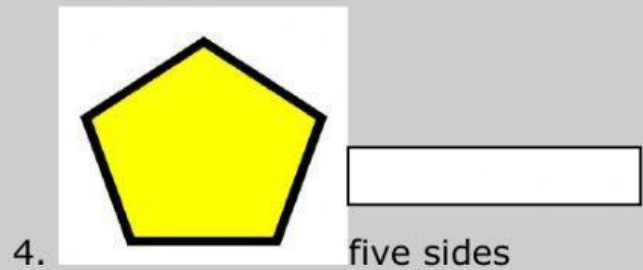
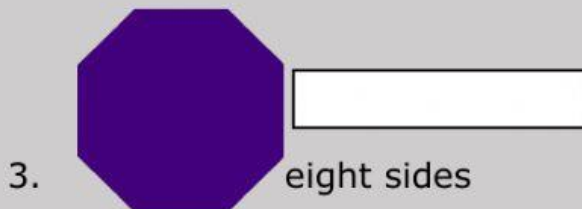




Friday 4th March, 2022.

Mathematics Test

Polygons

Name these polygons according to their number of sides.



Time

7. It was time for school. When I looked at the clock, the minute hand was on 6 and the hour hand was on 8. What time was it?


Ans:

8. Mary had a dentist appointment. When she looked at the clock, the minute hand was on 12 and the hour hand was on 2. What time was it?

Ans:

9. It was time to go to the cinema. When Tim looked at the clock, this is what is showed. What time is it?

Ans:



10. The analog clock below shows the time Tracy returned from the market.



What time did Tracy return from the market?

Ans: