

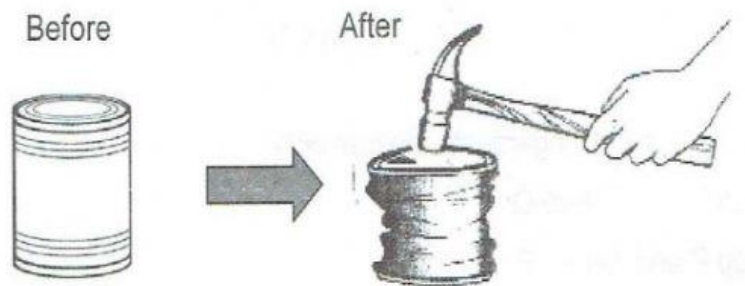
Name: ..... Date: .....

**THEME 2 – ENERGY AND FORCES.**

Answer the following questions in the spaces provided.

**Unit 2. Forces & Movement.**

1. A force is a .....  
A. push only.  
B. pull only.  
C. push or a pull.  
D. push or a press. ☐
  
2. A marble is moving and hits the wall. What happens to the marble after it hits the wall?  
A. The marble changes direction.  
B. The marble changes its shape.  
C. The marble pushes the wall.  
D. The marble stops moving. ☐
  
3. **Figure 2** shows a tin can being crushed by a hammer.



**Figure 2**

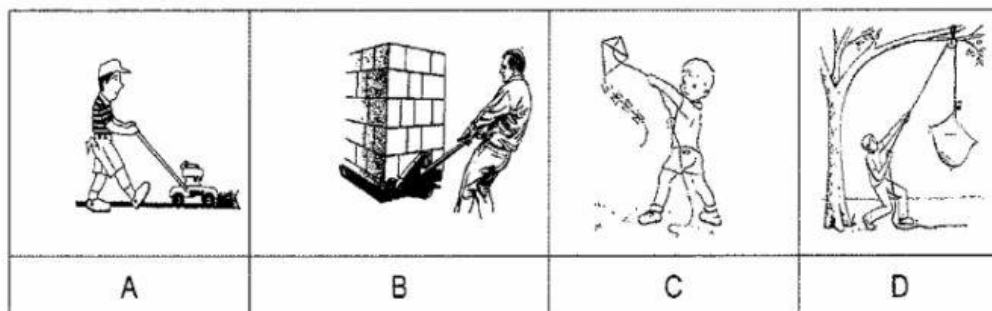
Which of the following is true about the force shown in **Figure 2**?

- A. Force can change the shape of an object.
  - B. Force can move an object.
  - C. Force can stop a moving object.
  - D. Force can change the direction of a moving object.
4. **Figure 3** shows a man kicking a ball and applying a force on it.





**Figure 3**

Which of the following activities show a similar force (push)?


☐

5. Which of the following best describes how can force can change the shape of an object?


☐


Marks: \_\_\_\_\_ / 5

Parents'/ Guardian's signature : \_\_\_\_\_

Parents'/ Guardian's feedbacks:

\_\_\_\_\_

\_\_\_\_\_