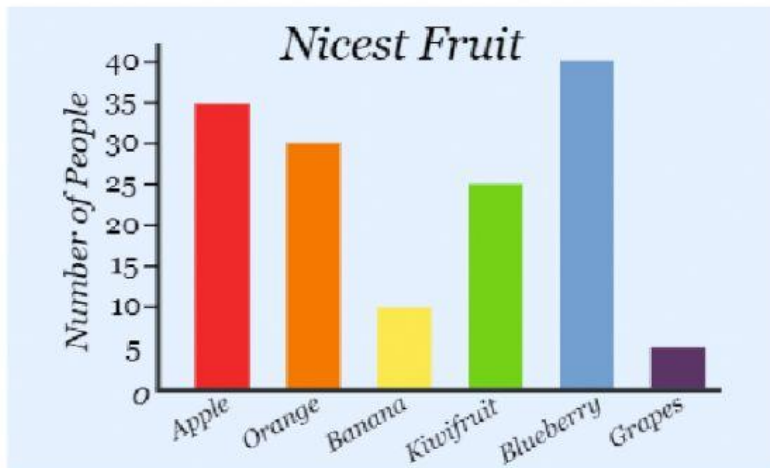


Unit 10: Graphs

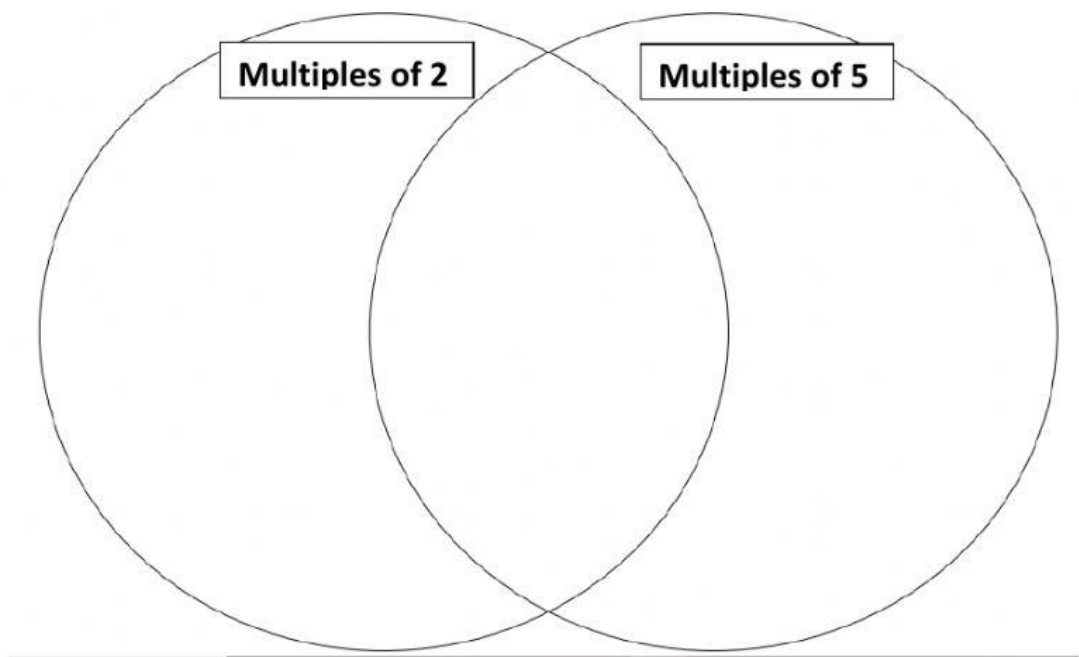
Question 1: Read the bar chart. Write the answers in the boxes.



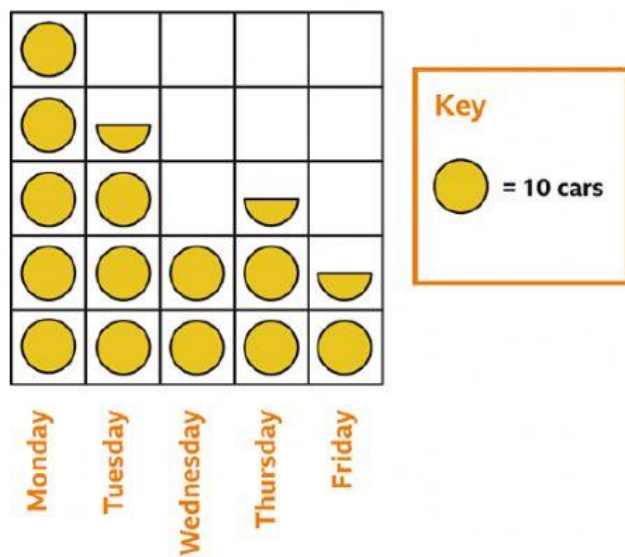
- How many people like apple?
- How many people like the banana?
- What is the most popular fruit?
- What is the least popular fruit?
- How many more people like blueberry more than oranges?

Question 2: Look at the box of numbers. Sort them into the correct multiples in the Venn diagram.

25	100	70	35	20	32
14	16	22	30	8	4

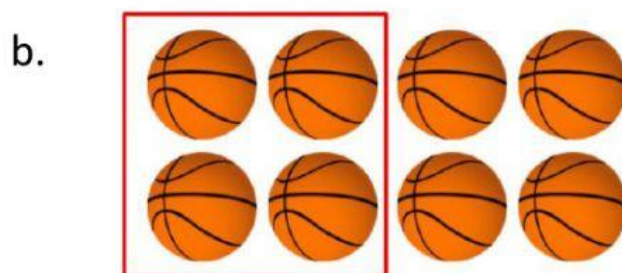
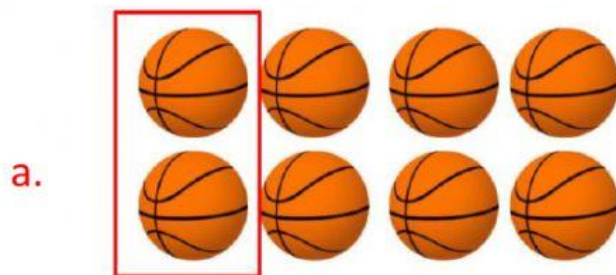


Question 3: Look at the pictogram. Select true or false to answer the questions



- a. Monday has the most numbers of cars.
- b. Tuesday has the least numbers of cars.
- c. There were 30 cars on Wednesday.
- d. The total number of cars on Thursday and Friday is 40.
- e. There are 5 fewer cars on Wednesday than Thursday?

Question 4: Look at each picture of the marbles. Match the fraction to each circled picture.



C.



D.



Question 5: Find the fractions of the larger number in the box.

40	$\frac{1}{4}$	$\frac{3}{4}$	$\frac{1}{5}$	$\frac{1}{2}$	$\frac{2}{10}$

Question 6: Write the answers to the fractions (use /)

Complete the additions.

a) $\frac{3}{8} + \frac{4}{8} =$

d) $\frac{3}{103} + \frac{4}{103} =$

b) $\frac{3}{9} + \frac{4}{9} =$

e) $\frac{5}{31} + \frac{9}{31} =$

c) $\frac{3}{29} + \frac{4}{29} =$

f) $\frac{17}{111} + \frac{33}{111} =$