











Look at the hairstyle of these children and answer the following questions:



HAIRSTYLE	NUMBER OF CHILDREN
	
	
	
	
	
	
	



1) children have  hairstyle.

2) Number of children with  is less / more than .

3) Number of children with  is less / more than .

4) Number of children with  is less / more than .

5) Number of children with  is less or more than .