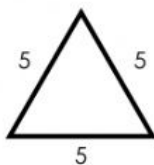
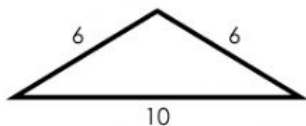


Name: _____

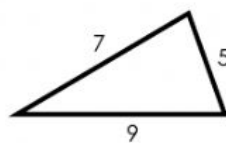
Triangles



Equilateral Triangle
All sides are the same length.



Isosceles Triangle
At least 2 sides are the same length.



Scalene Triangle
No sides are the same length.

Name each triangle by the lengths of its sides.

a. 3 in., 5 in., 3 in.

b. 14 cm, 9 cm, 8 cm

c. 24 mm, 24 mm, 24 mm

d. 12 ft., 12 ft., 15 ft.

e. 7 mi., 6 mi., 5 mi.

f. 32 m, 48 m, 48 m

Name each triangle pictured.


g.



h.



i.



j.

