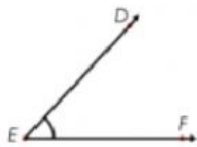


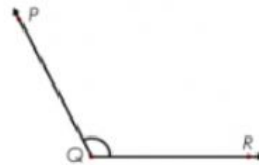
Triangles



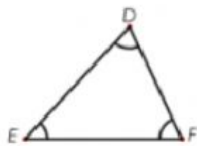
An **acute angle** is less than 90°



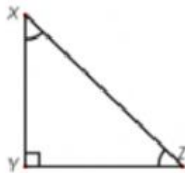
A **right angle** is exactly 90°



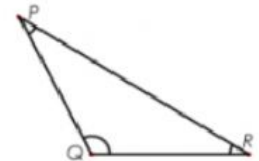
An **obtuse angle** is greater than 90°



An **acute triangle** has 3 acute angles.



A **right triangle** has 1 right angle and 2 acute angles.



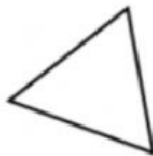
An **obtuse triangle** has 1 obtuse angle and 2 acute angles.

Identify each type of triangle as **acute**, **right** or **obtuse**.

a.



b.



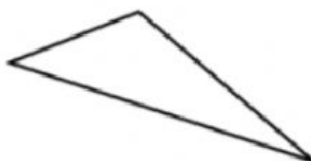
c.



d.



e.



f.