



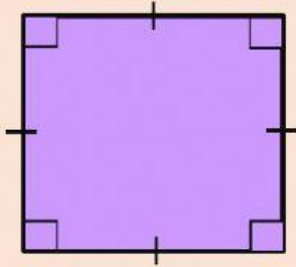
Name _____

class _____

Shape of quadrilateral

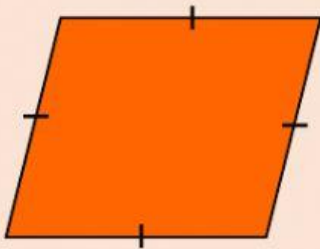
Choose the correct answer

1. What is this picture?



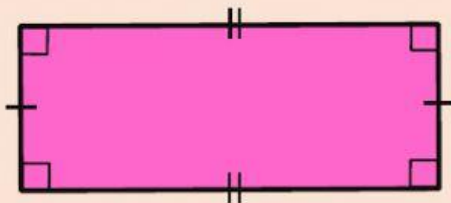
- | | |
|------------|------------------|
| 1. Square | 2. Rectangle |
| 3. Rhombus | 4. Parallelogram |

2. What is this picture?



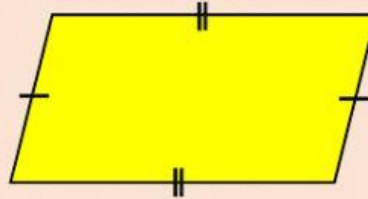
- | | |
|------------|--------------|
| 1. Square | 2. Trapezoid |
| 3. Rhombus | 4. Kite |

3. What is this picture?



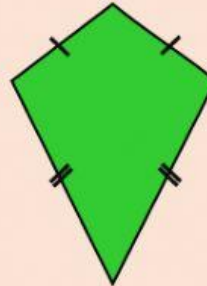
- | | |
|--------------|--------------|
| 1. Square | 2. Rectangle |
| 3. Trapezoid | 4. Rhombus |

4. What is this picture?



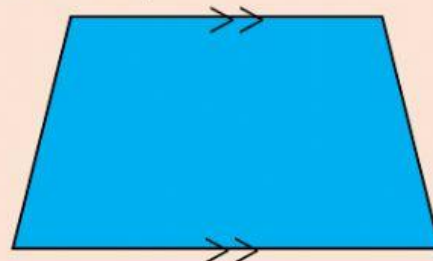
- | | |
|------------|------------------|
| 1. Kite | 2. Rectangle |
| 3. Rhombus | 4. Parallelogram |

5. What is this picture?



- | | |
|------------------|--------------|
| 1. Parallelogram | 2. Rhombus |
| 3. Kite | 4. Rectangle |

6. What is this picture?



- | | |
|------------|--------------|
| 1. Square | 2. Rectangle |
| 3. Rhombus | 4. Trapezoid |

7. What is this picture?



- | | |
|--------------|--------------|
| 1. Trapezoid | 2. Rectangle |
| 3. Rhombus | 4. Kite |

9. What is this picture?



- | | |
|------------|------------------|
| 1. Square | 2. Rectangle |
| 3. Rhombus | 4. Parallelogram |

8. What is this picture?



- | | |
|------------|------------------|
| 1. Square | 2. Trapezoid |
| 3. Rhombus | 4. Parallelogram |

10. What is this picture?



- | | |
|--------------|------------------|
| 1. Trapezoid | 2. Rectangle |
| 3. Rhombus | 4. Parallelogram |

