


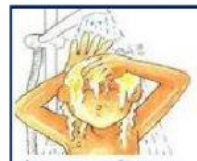





What time does she...?

42

Look at all the things Stella does during the day and choose the correct verb



Now, listen and write the time




half past seven



a quarter to nine






Now, look at the picture and the clock. Ask and answer about Stella using the actions in part 1.

REMEMBER to write the numbers in LETTERS!



What time **does** she get up?
She gets **s** up at seven o'clock.



What time she breakfast?
She breakfast at .

