

Name: _____

Year 1Bijak

Tuesday

1st March 2022

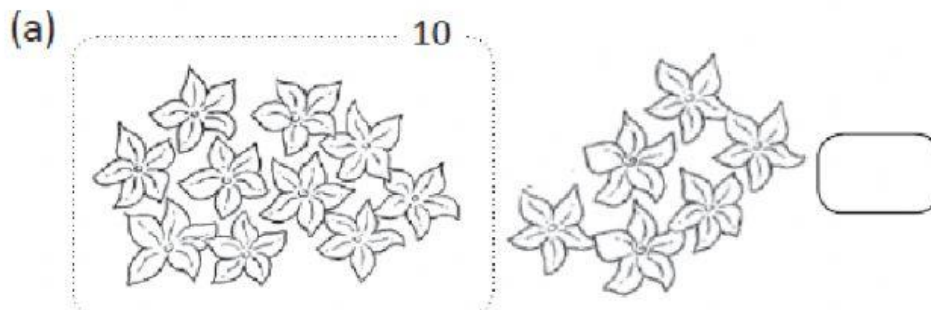
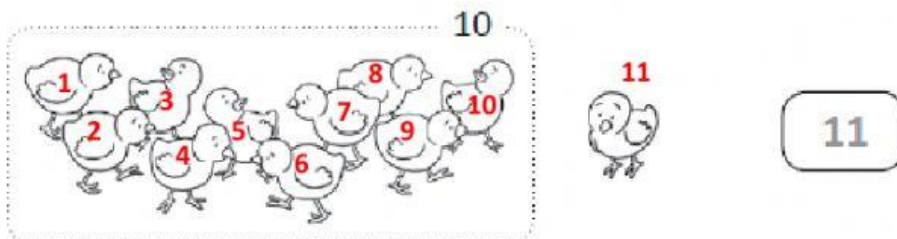
Chapter 5 - Numbers to 20

Topic: Counting to 20


Lesson Objective:	Steps to success (s2s):
Pupils will be able to: ✓ Count objects from 11 to 20	✓ First, make a 10 by circle a group of 10 items, ✓ Count on from 10. ✓ Find the total number of items and write the numbers.

1.) Count on from 10. Write the numbers.


Example




(c)



10



(d)



10



2.)

Find the missing numbers.

(a) 1, 2, 3, 4, 5, _____, 7

(b) 11, 12, 13, 14, 15, _____, 17

(c) 7, 8, _____, 10, 11, 12

(d) _____, 14, 15, 16, 17, 18

(e) 15, 16, 17, 18, 19, _____

(f) 5, _____, 7, 8, 9, _____, 11

(g) 13, 14, _____, 16, 17, 18, _____