

Write down your
identities here
(tuliskan identitas kalian di sini)

DARING 3 (7th Grade)



TIMES - British System

Name :


Class : 7 -

Student Number :

A. WATCH AND PAY ATTENTION TO A VIDEO BELOW.

(tonton dan perhatikan video di bawah ini)

Source: <https://www.youtube.com/watch?v=3icBxO6Wjz0>



B. PAY ATTENTION TO THE POWER POINT BELOW

(perhatikan power point di bawah ini)

WAJIB DICATAT DAN UPLOAD PADA GOOGLE CLASSROOM (PADA DARING 3).

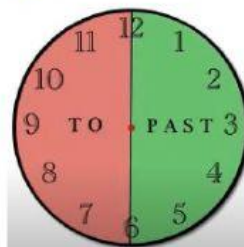
Materi pada *power point* wajib dicatat dan diupload pada *Google Classroom* yaa (pada daring 3).



CATAT:



Pada *British System*:

- ✚ 15 minutes = *a quarter* (seperempat)
- ✚ 30 minutes = *a half* (setengah)



PAST: lebih

TO : kurang



SOAL DIKERJAKAN ONLINE PADA LIVWORKSHEETS (DI SINI)/ TIDAK PERLU DITULIS

C. CHOOSE THE BEST ANSWER.

Question number 1.

Complete the dialogue below with the right answer.

Reza : _____ ? (1)
Fendy : It is three o'clock.

1. The right answer for question number 1 is _____.
- A. Hello. how are you today C. What date is today
B. Excuse me. What day is it today D. Excuse me. What time is it now

Question number 2.

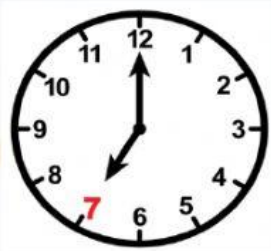
Read the dialogue below and choose right picture.

Ronald : Jessie, what time is your flight tomorrow?

Jessie : My flight will be at twenty minutes past seven in the morning.

2. The underlined sentence is shown by a picture of _____ (2)

A.



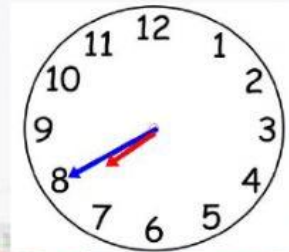
C.



B.



D.



Question number 3.

3. Based on the picture beside, Jeremy goes to school at _____ (3)

- A. quarter past six
B. thirty minutes past six
C. half past six
D. six o'clock



Question number 4.

Look at the picture and answer the question.



4. What time is it? It is _____ (4)

- A. ten minutes to ten
- B. ten minutes past ten
- C. twenty minutes past ten
- D. quarter past ten

Question number 5.



5. Based on the picture, Angelina gets up at _____ (5)

- A. half past three
- B. half past four
- C. half past five
- D. half past six

**D. WRITE THE SENTENCES OF THE TIME AS THE EXAMPLES (BRITISH SYSTEM).
EXAMPLES:**



It is **twenty five minutes past nine.**



It is **twenty minutes to one.**

(1)



It is _____

(4)



It is _____

(2)



It is _____

(5)



It is _____

(3)



It is _____