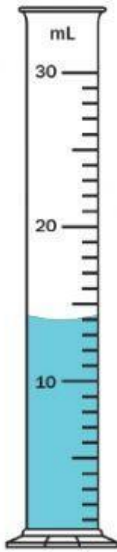


Name: \_\_\_\_\_

# Graduated Cylinders

Read each graduated cylinder and write the amount. Be sure to include **mL** in your answer.

a.




14 mL

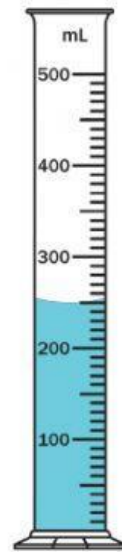
b.




c.



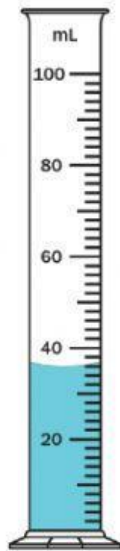
d.



e.



f.



g.



h.

