

Area

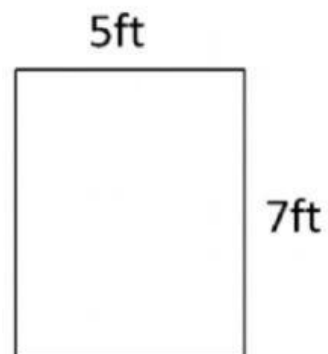
Find the area.

1)



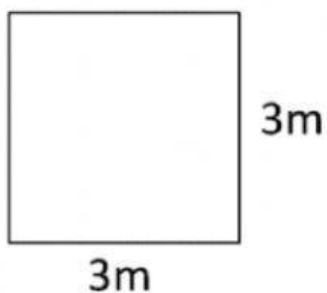
Area = _____ square cm

2)




Area = _____ square ft

3)



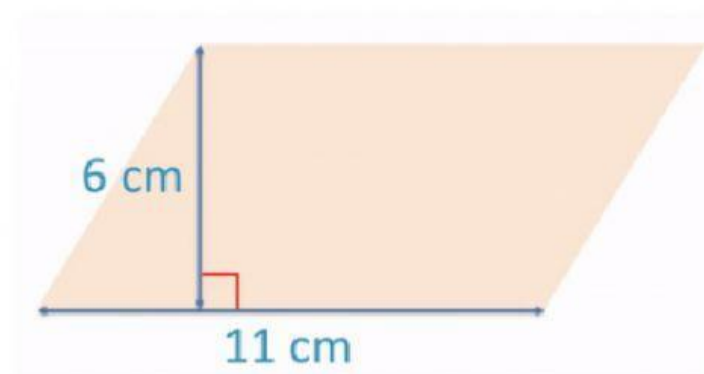
Area = _____ square m

4)



Area = _____ square in

5)



Area = _____ square cm

- 6) Bob has a parallelogram garden.
Its height is 10m and its base is 4m.
What is the area of Bob's Garden?
-

- 7) Tom has a parallelogram plate.
Its height is 5cm and its base is 2cm.
What is the area of Tom's plate?
-

- 8) Jennie throws a party in a parallelogram room.
Its height is 12m and its base is 3m.
She says the room's area is less than 35 square meters.
Is she correct? Explain.
-