


**Pagsasanay**

**GAWAIN 1- SUBUKAN NATIN**

Panuto: Bilugan ang  $\frac{1}{2}$  ng mga bagay. Isulat ang sagot sa patlang.

1.   
 $\frac{1}{2}$  ng 12 donuts ay \_\_\_

Page 2 of 25

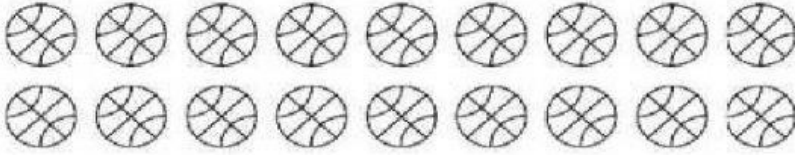
MODULE CODE: PASAY-M1-Q3-W3-D1

Pangalan: \_\_\_\_\_ Petsa: \_\_\_\_\_

Pangalan ng Guro: \_\_\_\_\_ Pangkat: \_\_\_\_\_

2.   
 $\frac{1}{2}$  ng 20 siopao ay \_\_\_

3.   
 $\frac{1}{2}$  ng 8 bituin ay \_\_\_


4.   
 $\frac{1}{2}$  ng 18 bola ay \_\_\_

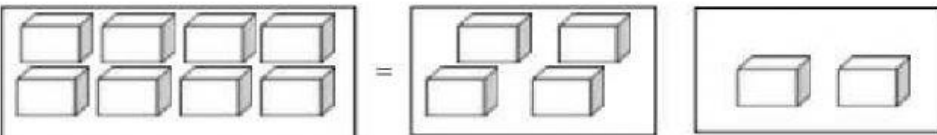
5.   
 $\frac{1}{2}$  ng 24 cakes ay \_\_\_

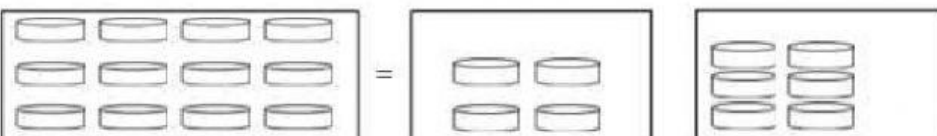
Pangalan: \_\_\_\_\_ Petsa: \_\_\_\_\_  
 Pangalan ng Guro: \_\_\_\_\_ Pangkat : \_\_\_\_\_

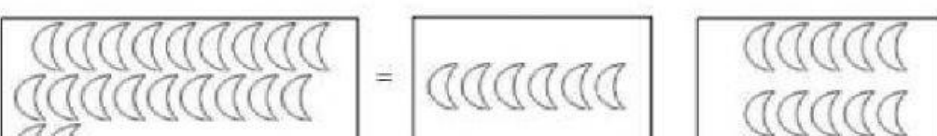
**PAGTATAYA**


Panuto: Iguhit ang 😊 sa pangkat na nagpapakita ng  $\frac{1}{2}$  ng mga bagay sa kaliwa.

1. 

2. 

3. 

4. 

5. 

inihanda ni:  
 MA.LYN C. BAGO  
 P.Burgos Elem. School