

U2/ M2-L 3

ST name:

4 \

Q1: Put correct number of meaning near each type of energy:

- 1- To use something more than once. استخدام الشيء أكثر من مرة.
 2- To less the amount of something is used. تقليل الاستهلاك
 3- Any harmful substance that affect Earth's land, air, water.
 4- When an item is made into new product. الشيء يتغير لشيء آخر.
 5- The act of saving, protection or using resources wisely.
 صيانة والحفاظ على البيئة واستخدام المصادر بحكمة

- A-(.....) Reduce تقليل استخدام
 B-(.....) Recycle إعادة تدوير
 C- (.....) Conservation الحفاظ على- صيانة
 D- (.....) Reuse إعادة استخدام
 E- (.....) Pollution تلوث

Q2: choose correct answer:

1-Fossil fuels used in transportation can cause problems. Which is a possible solution to these problems?

- a- Use biofuels and solar power in cars. b- Have car use more fossil fuels.
 c- Make hybrid cars سيارة هجين, which use both gas and electricity.

2-When an item is it is made into a new product.

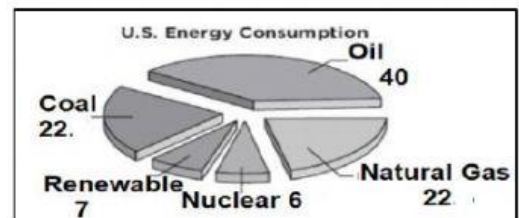
- a- Reused b- Recycled c- Reduce

3-Which is **not** a source of renewable energy?

- a- Fossil fuels b- Wind energy c- Solar energy

4-What percentage of the energy resources used by Americans comes from fossil fuels?

- a- 7 % b- 40 % c- 84 %



5-Burning oil as fuel can release harmful substances called

- a- Conservation b- Pollution c- Recycling

6- The overuse of fossil fuels leads to a-Flooding b-Pollution c- Fertile soil

7-What should we do about energy sources in the future?

- a-Nothing; all energy sources are replaceable. b- Find ways to use renewable sources.
 c- Develop more technology that relies on fossil fuels.

8-Reducing the amount of resources we use, called, will allow resources to be saved for a later time. a-Conservation b- Pollution c- Recycling.

9- How can you conserve energy and help protect our environment?

a- Leave water on, leave TV on.

b- Leave the refrigerator door open

c- Turn off water, turn off lights, turn off TV.

10- What is energy conservation?

a- Using less energy

b- Using more energy

c- Natural resource

11- Which of the following is a way to reduce energy?

a- Turn ON all the lights

b- Turn OFF all the lights

c- Turn ON the heater to high heat

Q2: Look to these pictures then put correct number on each one: ضع في كل صورة رقمها الصحيح

1-Air Pollution تلوث هواء

2-Land Pollution تلوث الأرض

3-Water Pollution تلوث الماء

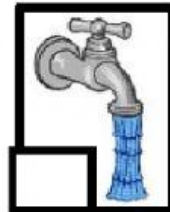
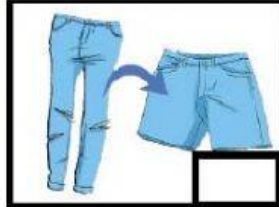


Q3: Look to these pictures then put correct number on each one: ضع في كل صورة رقمها الصحيح

1- REDUCE تقليل

2- REUSE إعادة استخدام

3-RECYCLE تدوير



Q4: Classify each type of energy in to correct number: صنف كل أنواع الطاقة الى رقمها الصحيح

1-Pollution Environment ملوث للبيئة

2- Not Pollution Environment غير ملوث

Nuclear Energy نووية	Natural Gas غاز	Oil بتترول	Solar Energy شمسية	Hydro electri city	Wind Energy الرياح	Coal الفحم	Geothermal Energy حرارية جوفية	Biofuel وقود حيوي