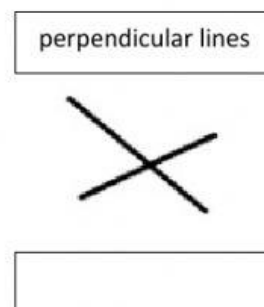

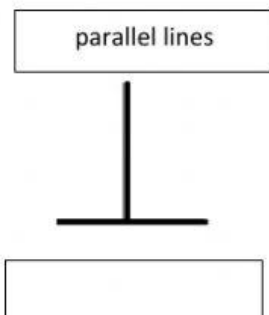


Name: _____ Date: _____

Select the correct answer

1. The value of the **9** in the number 10,982 is ____
a. tens b. millions c. hundreds
2. What is the mode in Tommy's test scores? **15, 18, 16, 15, 16, 15, 18, 17, 15**
a. 17 b. 15 c. 18
3. The HCF of 6 and 9 is ____
a. 5 b. 10 c. 3
4. What are the factors of 18?
a. 1, 3, 6, 18
b. 1, 2, 3, 6, 9, 18
c. 1, 2, 3, 18, 27

5. Match these lines to their correct names (3 marks)



Say whether the following statements are true or false (1 mark each)

6. 5 times 7 will give 35. _____
7. All odd numbers end with 1, 3, 5, 7 or 9. _____
8. 45 rounded off to the nearest 10 is 40. _____

Answer these correctly. (1 mark each).

9. $1000+300+40+3=$ _____
10. $1\text{cm} =$ _____ mm
11. $\frac{3}{9} + \frac{4}{9} =$ _____

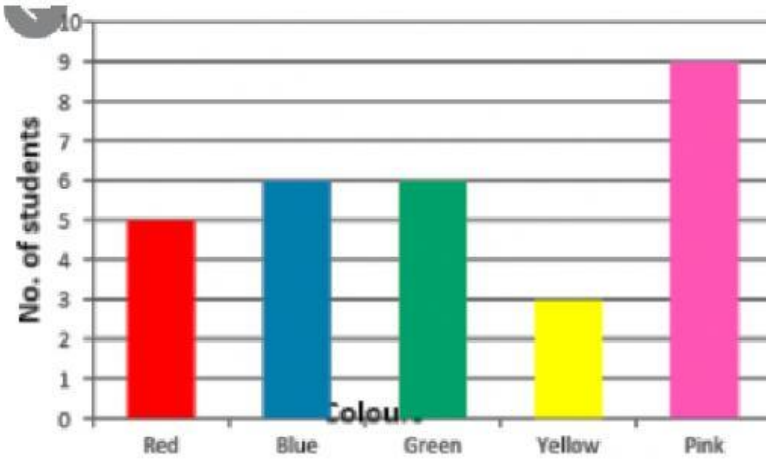
12.Fill in the missing spaces (3 marks)

Shape	Number of Faces	Numbers of Edges	Number of Vertices
cone	2		1
cube	6	12	
cylinder		3	0

13.Select the even numbers (2 marks)

17	6	9	10
18	1	4	11

Answer the questions about the bar graph below. (2 marks)



14. How many students like blue? _____

15. What colour do the children like the most? _____