



WINDSOR MODERN COLLEGE
SECOND QUARTER
SCIENCE QUARTERLY EXAM

Name: _____

Date: _____

SECOND GRADE

I. Complete the sentences with the words from the box.

clay soil	loam	sandy soil	soil	texture
-----------	------	------------	------	---------

1. The red color of _____ comes from the nutrient Iron.
2. _____ is made of small pieces of rocks and feels dry and rough.
3. _____ is a kind of soil that is made of pieces of living things that have died.
4. _____ is how something feels.
5. It is the top layer of Earth _____.

II. Write in the line the correct name for each image

_____	_____	_____	_____	_____
-------	-------	-------	-------	-------
















III. Circle the best way to help the environment for each item.

	reduce reuse recycle
	reduce reuse recycle
	reduce reuse recycle
	reduce reuse recycle
	reduce reuse recycle